

Intro to Linear Equations

Math 3 6.0

Linear Equations:

$$y = 2x - 7$$

$$y = \frac{1}{2}x - 5$$

$$2x - 3y = 12$$

Linear Equations generally contain two variables: x and y .

In a linear equation,

y is called the dependent variable and
 x is the independent variable.

This is because y is dependent on what you plug-in for x .

The **domain** of a linear equation is the set of all x -coordinates and the **range** is the set of all y -coordinates.

Examples:

State the range and the domain for each set of points below.

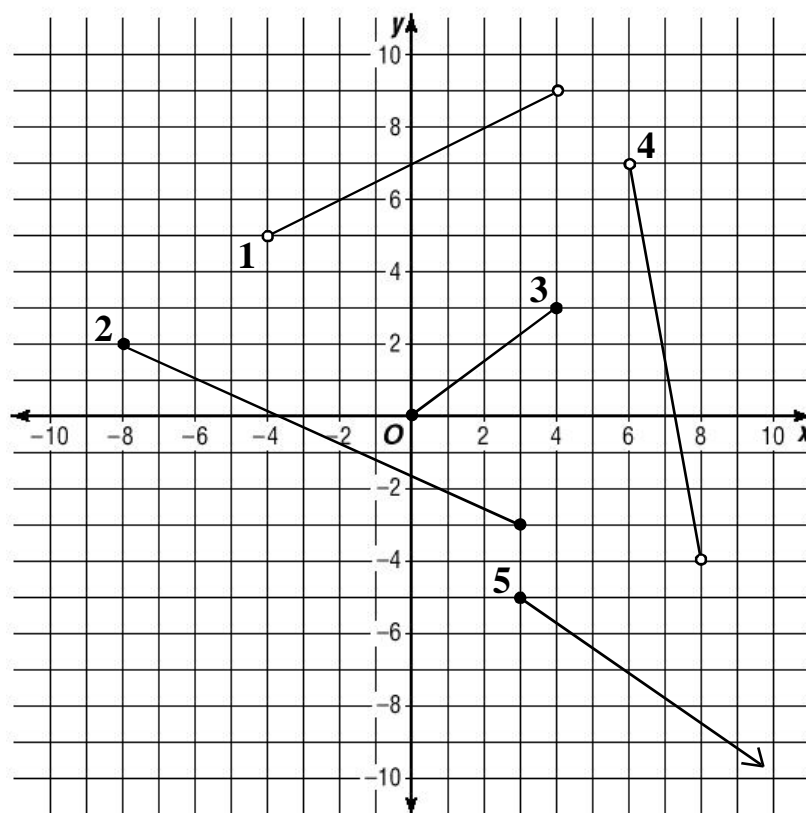
1. $(-3, -3)$ $(-1, 1)$ $(1, 5)$ $(3, 9)$ $(5, 13)$

2. $(-5, 8)$ $(-2, 5)$ $(1, 5)$ $(4, 9)$ $(7, 13)$

Practice:

State the range and domain for each set of points graphed below as an inequality:

Ex. #1 Domain $-4 < x < 4$ Range: $5 < y < 9$



Intro to Linear Equations

Given a **domain**, it is easy to find the **range** for any linear equation.

Examples:

Find the range for the given domain:

1. $y = 2x - 3$ {D: -3, -2, -1, 0}

2. $y = 2x - 3$ {D: 6, 1, -4, -9}

Practice:

Find the range for the given domain:

1. $y = -3x - 7$ {D: -3, -2, -1, 0}

2. $y = \frac{2}{3}x - 1$ {D: 6, 3, 0, -3, -6}

3. $2y = 6x - 10$ {D: -1, 1, 3, 5}

In problems like #3 above, it helps a lot to solve for y before plugging in values for the domain.

Practice:

Find the range for the given domain. Begin by solving for y .

1. $2y - 7 = 4x - 5$ {D: -3, -2, -1, 0}

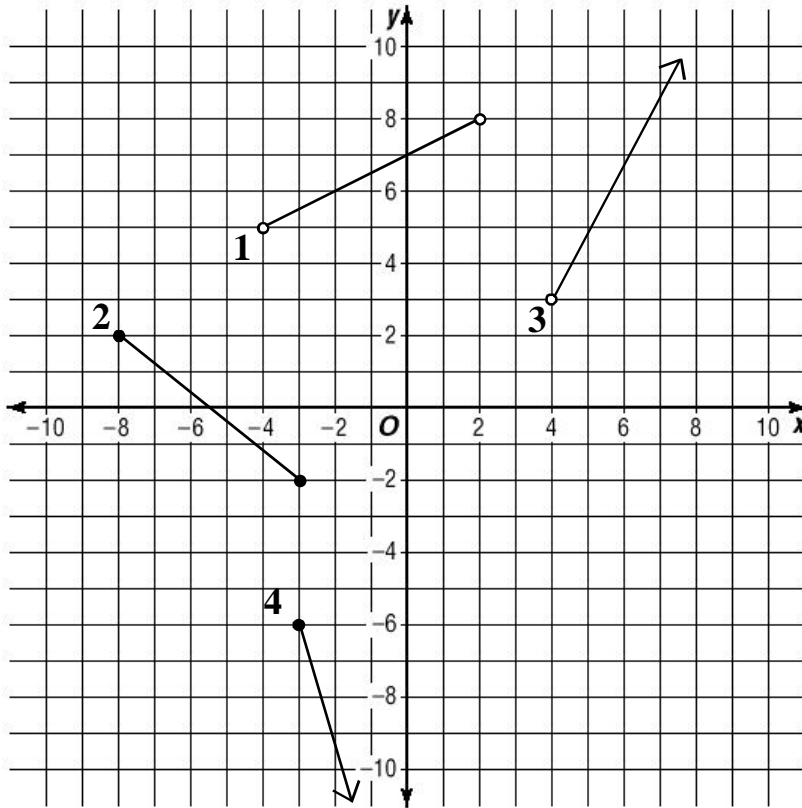
2. $3y - 6 = -9x$ {D: 6, 3, 0, -3}

3. $5y = 3x - 10$ {D: $x > 5$ }

Intro to Linear Equations

Math 3 6.0

For each graph below, state the domain and range using an inequality:



1. Domain: _____

Range: _____

2. Domain: _____

Range: _____

3. Domain: _____

Range: _____

4. Domain: _____

Range: _____

List the Domain and Range for each set of points listed below:

5. $(9,1)$ $(8,2)$ $(7,3)$ $(6,4)$ $(5,5)$

5. Domain: _____

Range: _____

6. $(-3,-3)$ $(-3,-4)$ $(-3,-5)$ $(-3,-6)$

6. Domain: _____

Range: _____

7. $y = x - 3$ for $x = -3, -4, 5,$ and 6

7. Domain: _____

Range: _____

8. $y = 2x + 5$ for $x > 3$

8. Domain: $\{D: x > 3\}$

Range: _____

Intro to Linear Equations

Math 3 6.0

Given each domain below, find the range for each equation. Solve for y where necessary.

9. $y = -2x + 3$ {D: -1, 0, 1, 2}

9. Range: _____

10. $y = \frac{1}{2}x - 5$ {D: -4, -2, 0, 2}

10. Range: _____

11. $3y = -6x + 12$ {D: -5, -3, 1, 5}

11. Range: _____

12. $x - y = 4$ {D: 4, 1, -1, -9}

12. Range: _____

13. $3y = x + 6$ {D: -3, 0, 3, 9}

13. Range: _____

14. $5y - 3x = 10$ {D: -15, -10, -5, 0}

14. Range: _____

15. $2x + y = 3x - 7$ {D: -4, 4, 12, 20}

15. Range: _____

Graphing A Linear Equation

To graph a Linear Equation:

1. Solve for y.
2. Setup a table of x and y values.
3. Plot at least three coordinates and connect them.

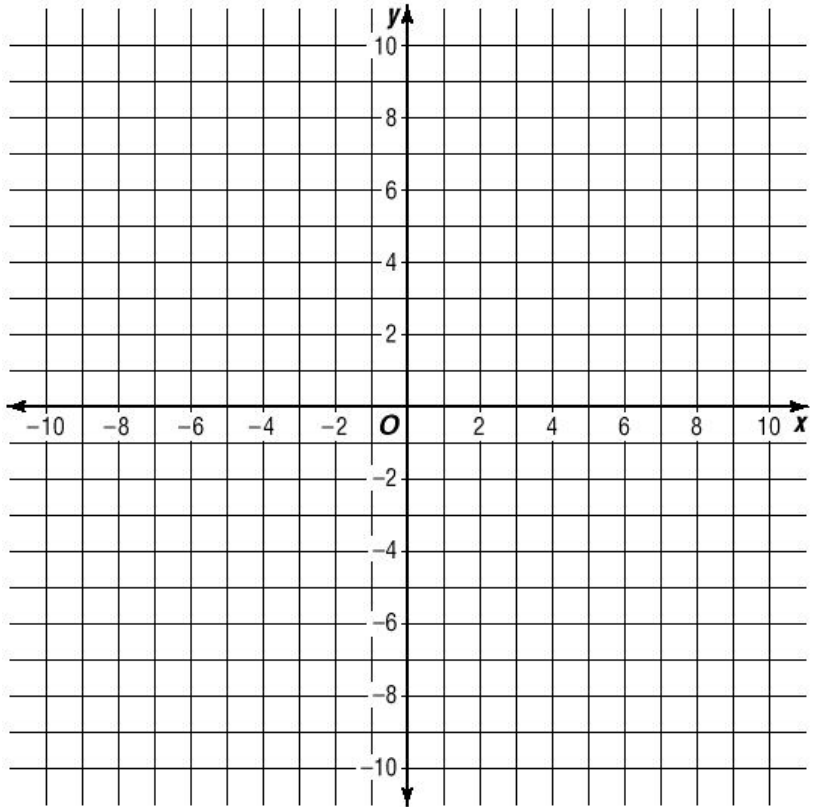
Ex.

Graph

$$y = 2x - 7$$

Graph

$$y = \frac{2}{3}x + 2$$



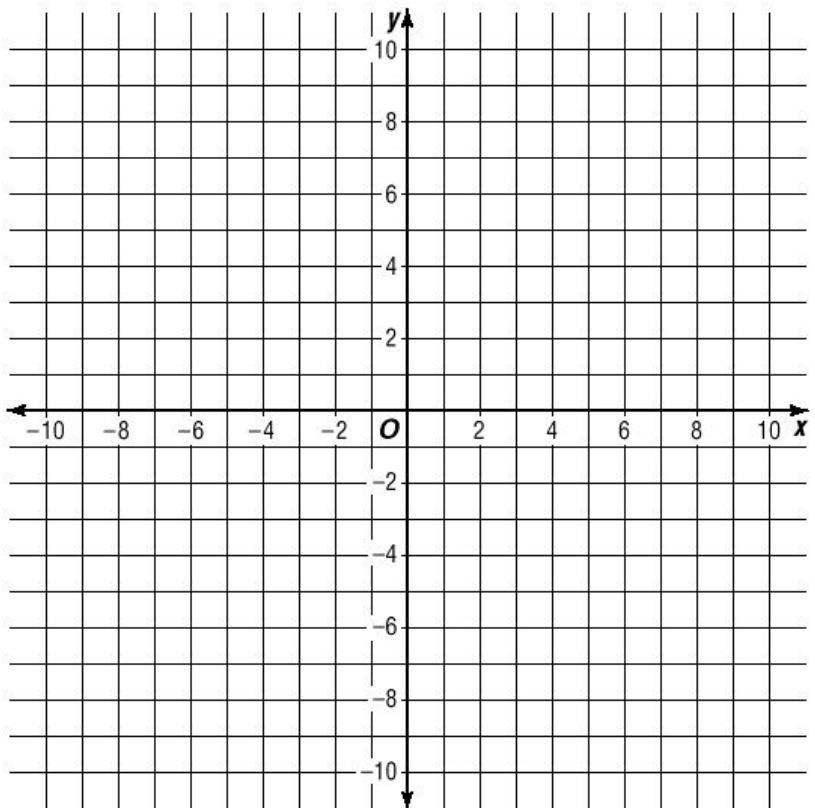
Practice

Plot each of the following equations on the same graph.

1. $y = -3x + 4$

2. $y = \frac{3}{4}x - 5$

3. $y + 3x = 9$



Graphing A Linear Equation

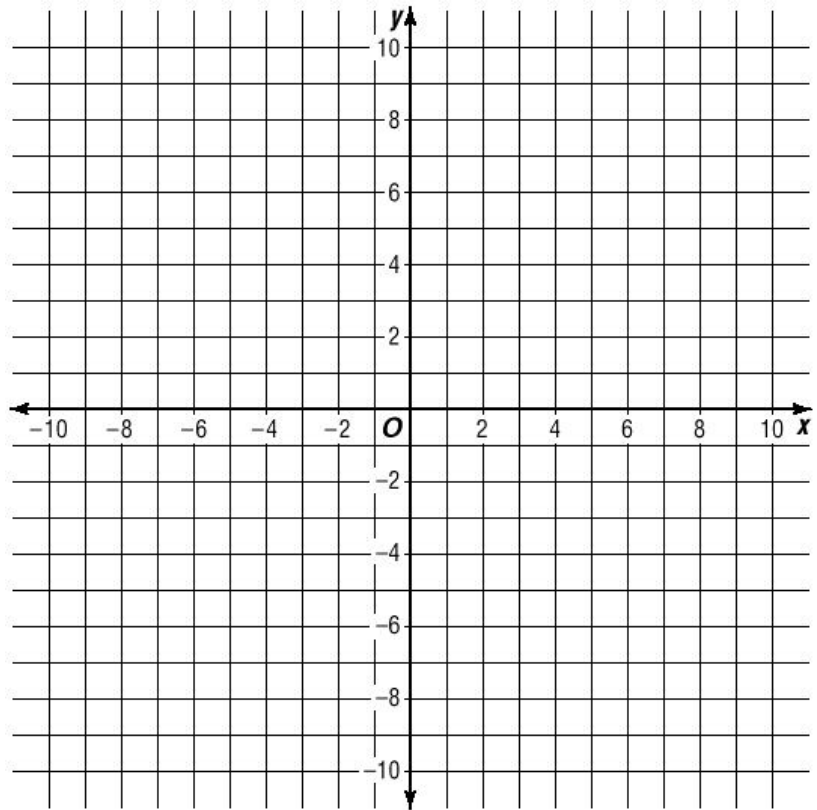
Practice

Plot each of the following equations on the same graph.

1. $x - y = 5$

2. $3y = 2x - 9$

3. $3y - 12 = 2x$



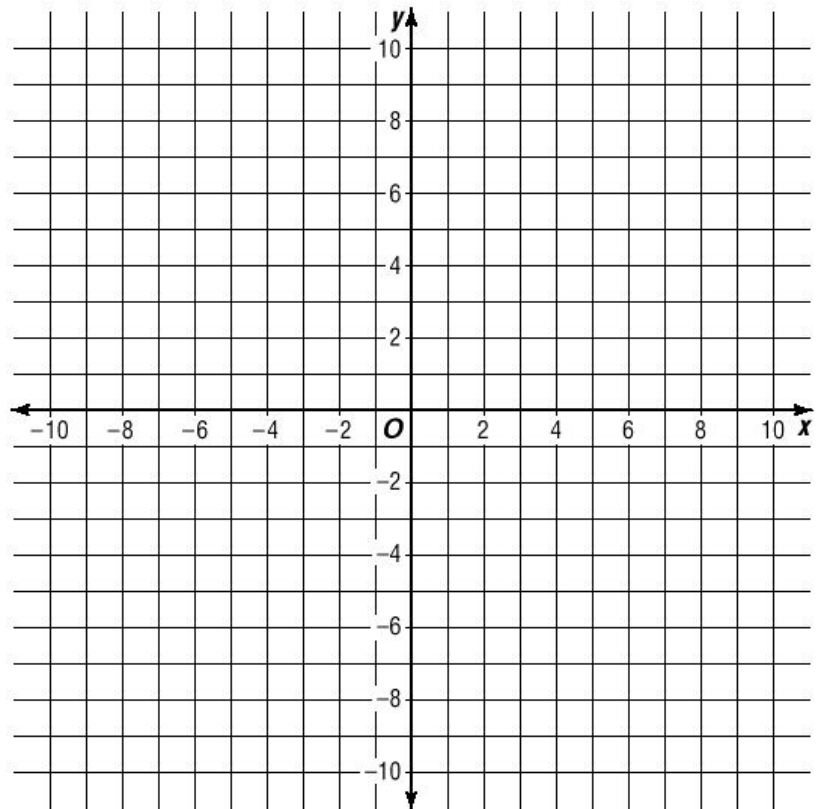
Practice

Plot each of the following equations on the same graph.

1. $-3x = y - 5$

2. $3 = 4x - y$

3. $y - 5 = \frac{2}{3}(x + 3)$

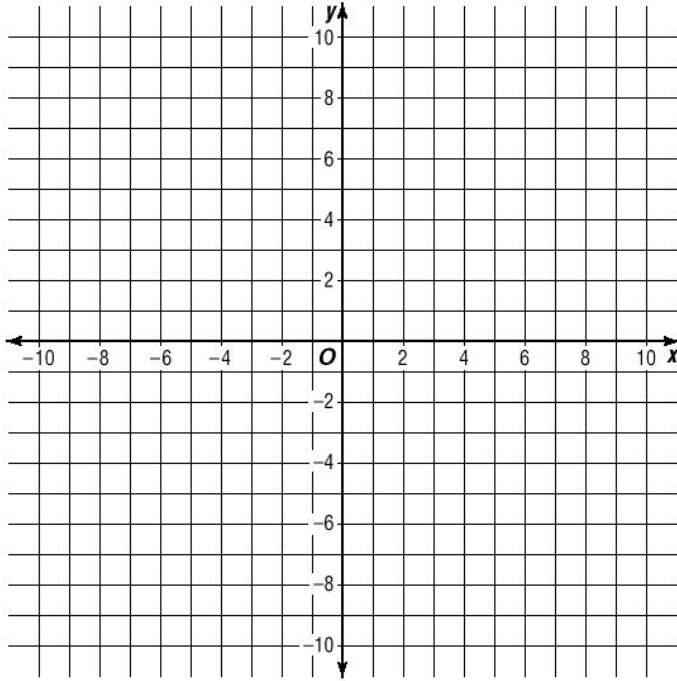


Graphing Linear Equations

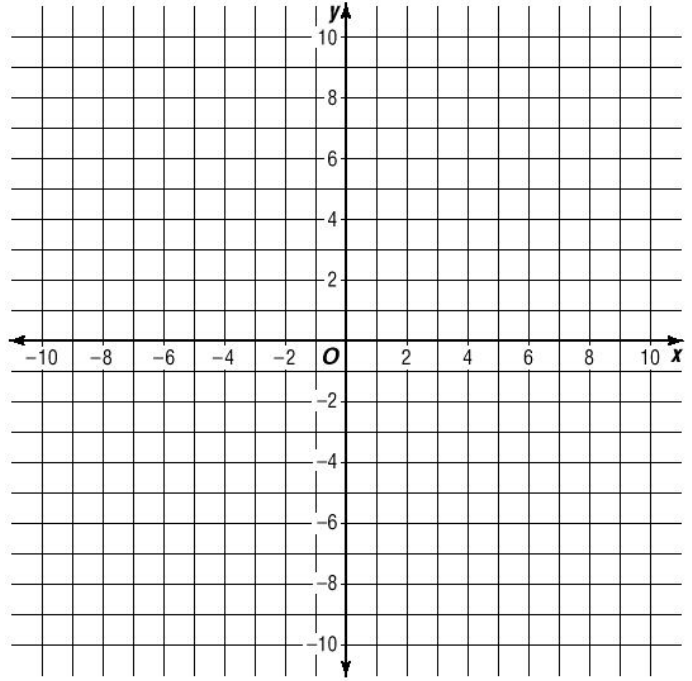
Math 3 6.0

Graph each equation below on the graphs provided.

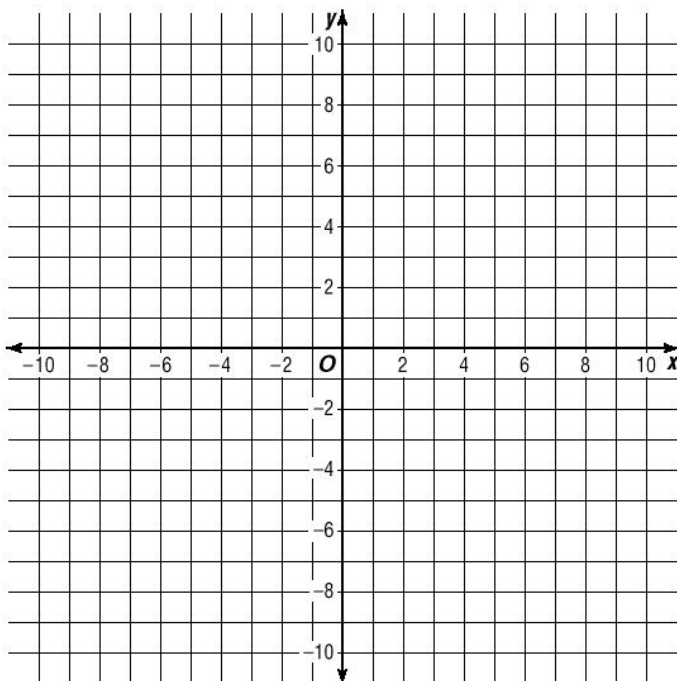
1. $y = x - 9$



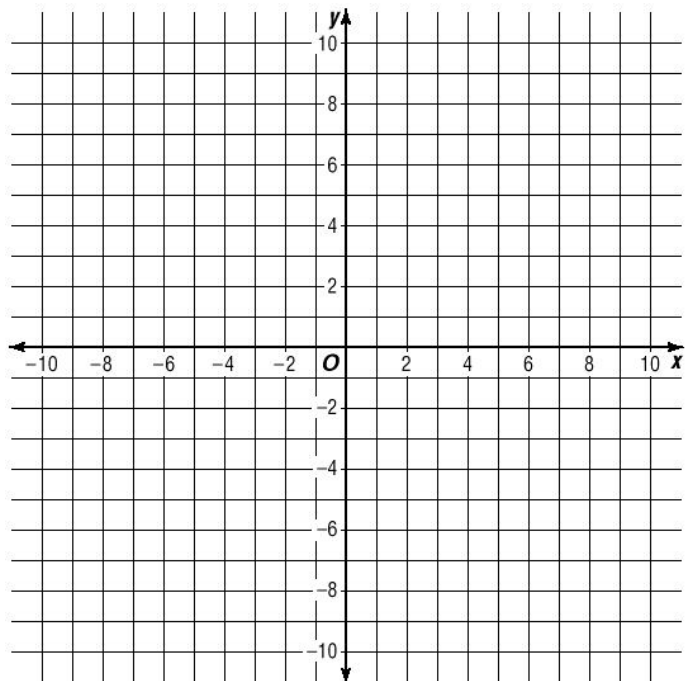
2. $3y = 2x - 12$



3. $6x - 2y = 4$



4. $y - 3 = \frac{1}{2}x - 6$

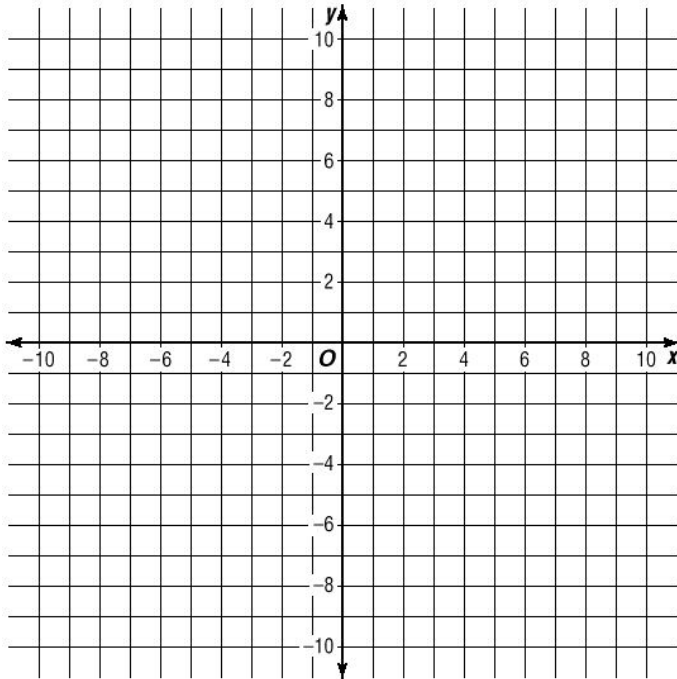


Graphing Linear Equations

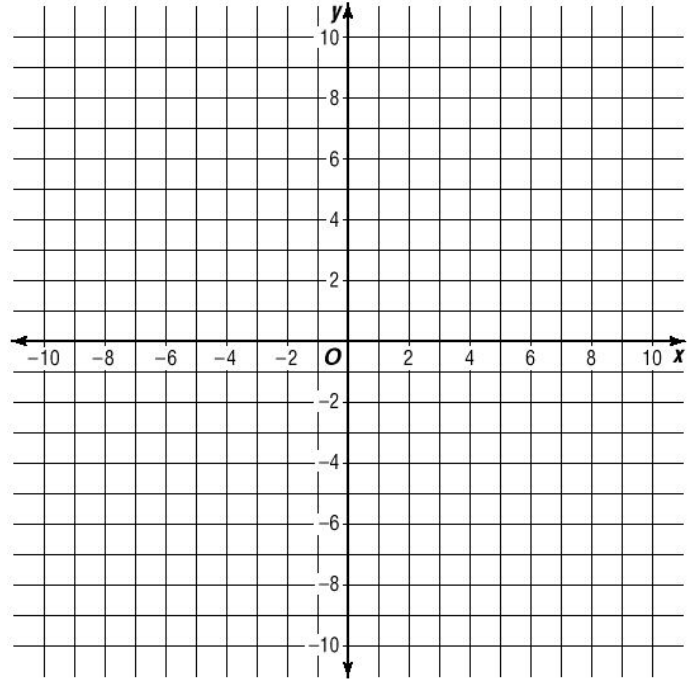
Math 3 6.0

Graph each equation below on the graphs provided.

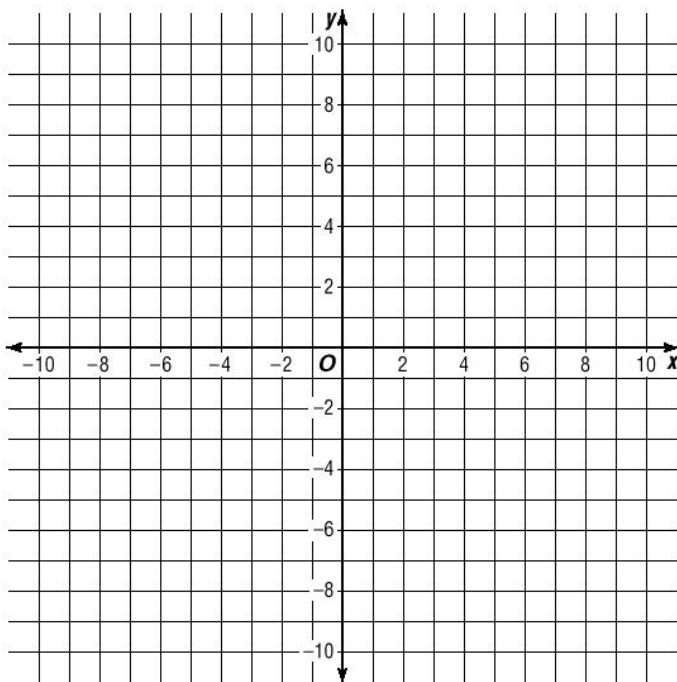
5. $4y + 11 = 3x - 1$



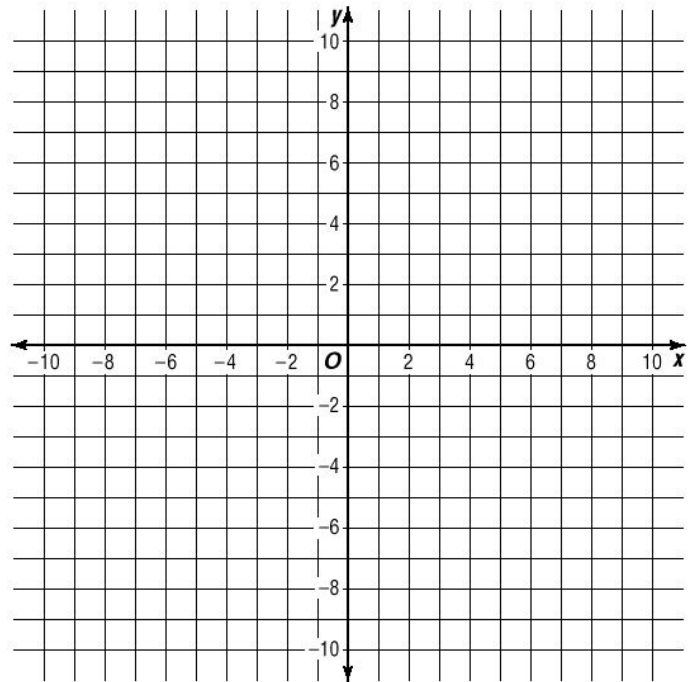
6. $2x - 6 = 3y + x$



7. $\frac{3}{4}x = y + 1$



8. $y = 5$ (this is the same as $y = 0x + 5$)



Standard Form

Standard Form of a linear equation:

$$2x - y = 6$$

$$3x - 7y = 21$$

$$2x - 6y = 1$$

Examples above are **Linear Equations written in Standard Form**. Here is **Standard Form**. **MEMORIZE THIS**.

$$Ax + By = C$$

1. No absolute value, exponents, square roots, etc.
2. 1 or 2 variables (A and B cannot both be zero).
3. All linear equations can be written in Standard Form.
4. A, B, and C are Integers (not fractions). A should be positive.

Practice:

Label the values for A, B, and C in each linear equation below.

1. $2x - y = 6$

2. $3x - 7y = 21$

3. $x = 7$

Examples:

Convert each equation below into Standard Form if possible.

Get both variables ON THE SAME SIDE OF THE EQUATION.

1. $y = 3x - 5$

2. $\frac{1}{2}y = \frac{2}{3}x - \frac{3}{4}$

3. $\frac{x}{3} = \frac{5}{y}$

Practice:

Convert each equation below into Standard Form if possible.

1. $y - 5 = x$

2. $\frac{3}{5}y = \frac{1}{4}x$

3. $x(x + 1) = y$

Standard Form

Convert each equation below into Standard Form.
Remember to remove all fractional coefficients.

1. $x = y - 3$

2. $-3y = 7 - 2x$

3. $\frac{7 - x}{4} = y$

4. $2(x - 2) = 10y$

5. $x = 7$

6. $-2y = 12$

7. $x = 4y$

8. $5y = 2x$

9. $y = \frac{2}{3}x - 4$

10. $2 + \frac{2}{5}x = \frac{4}{5}y$

11. $x = \frac{1}{2}y - 3$

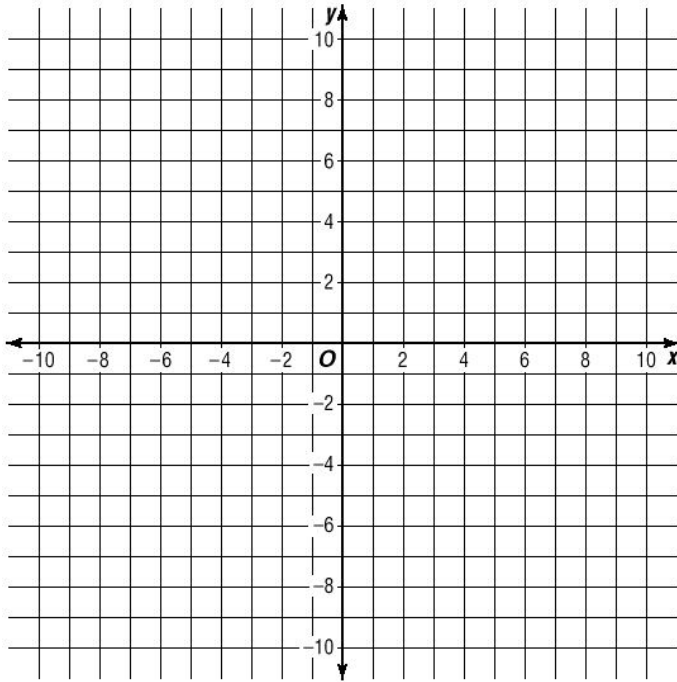
12. $\frac{2}{9}x = y - 1$

Standard Form

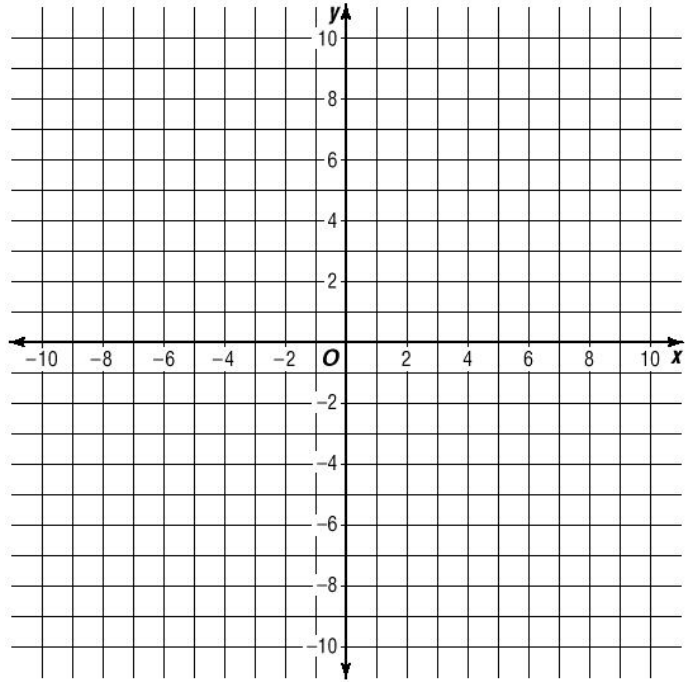
Math 3 6.0

Each Equation below is written in Standard Form.
Solve each for y , create a table of values, and graph each.

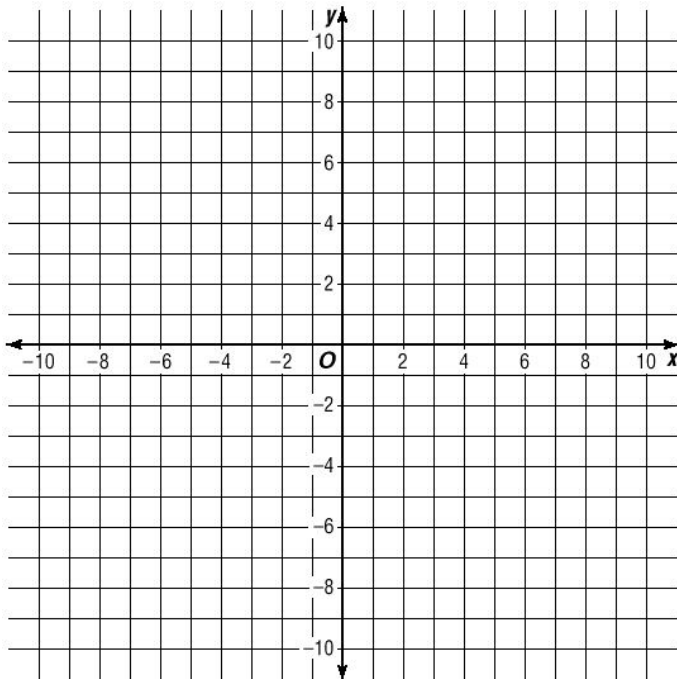
13. $x - y = -3$



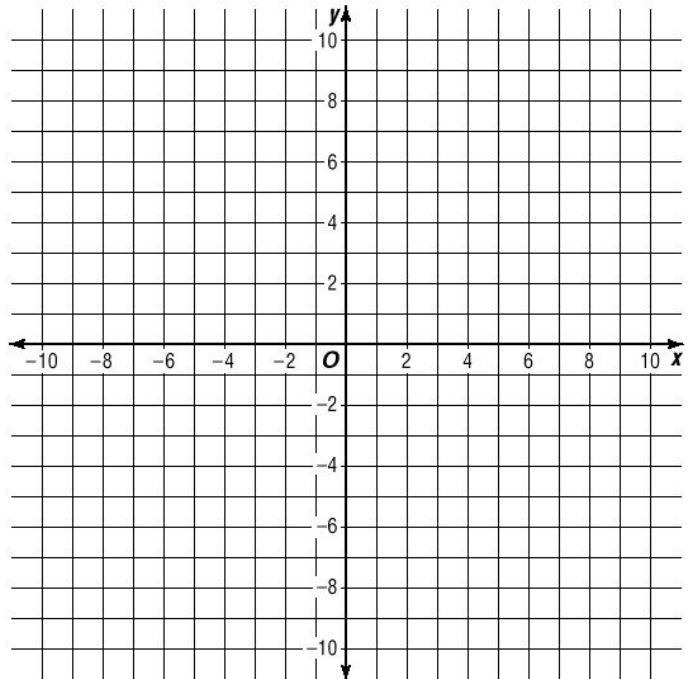
14. $6x - 3y = -12$



15. $3x + y = 6$



16. $x + 2y = 6$



Standard Form and Intercepts

On a graph, the **x-intercept** is where the line crosses the x-axis.
The **y-intercept** is where a line crosses the y-axis.

Practice:

Look at the graphs below and give the coordinates of the x and y-intercepts.

1.
x-int. _____

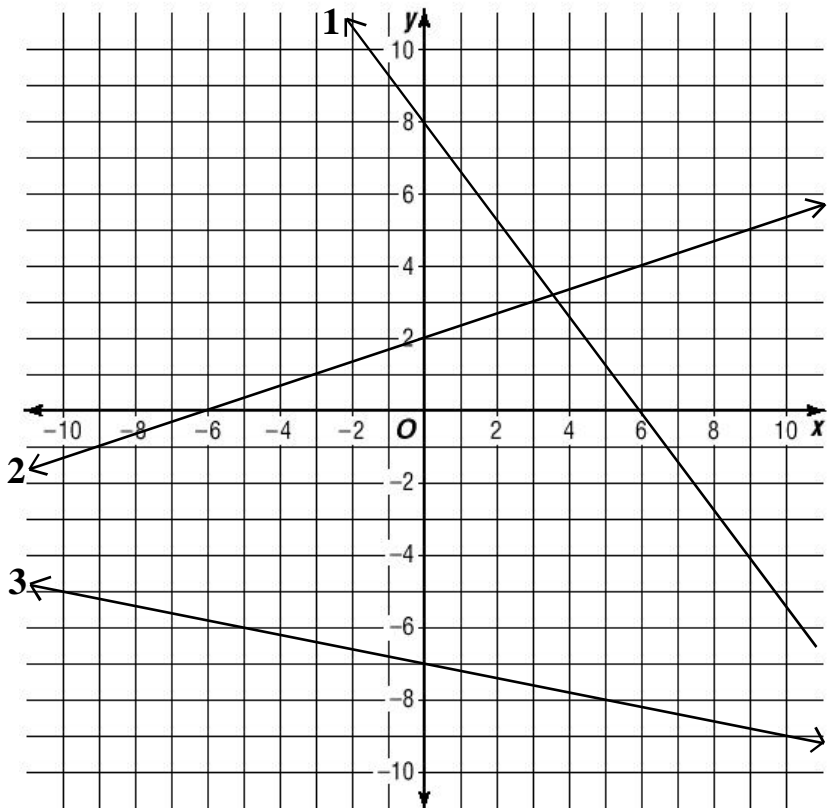
y-int. _____

2.
x-int. _____

y-int. _____

3.
x-int. _____

y-int. _____



notes:

The x-intercept always occurs where y equals _____.

The y-intercepts always occurs where x equals _____.

Set $y=0$ to find the x-intercept.

Set $x=0$ to find the y-intercept.

Examples: Find the x and y-intercepts of each.

We will call this the coverup method.

1. $3x - y = 12$

2. $2x - 5y = 4$

3. $2x - 3y = 8$

Practice: Find the x and y-intercepts of each.

1. $5x + 3y = 30$

2. $x - 7y = 11$

3. $\frac{3}{4}x - \frac{2}{3}y = 7$

Standard Form and Intercepts

Math 3 6.0

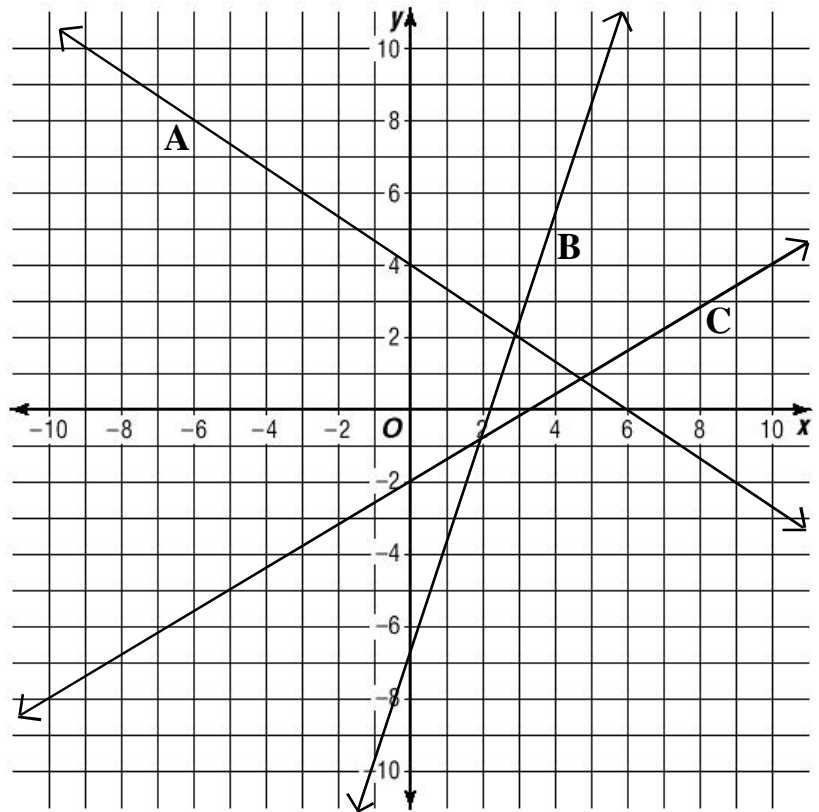
Practice:

Each line below goes with one of the linear equations on the left. Match each equation with its graph by finding the intercepts.

1. $2x + 3y = 12$

2. $3x - 5y = 10$

3. $3x - y = 7$

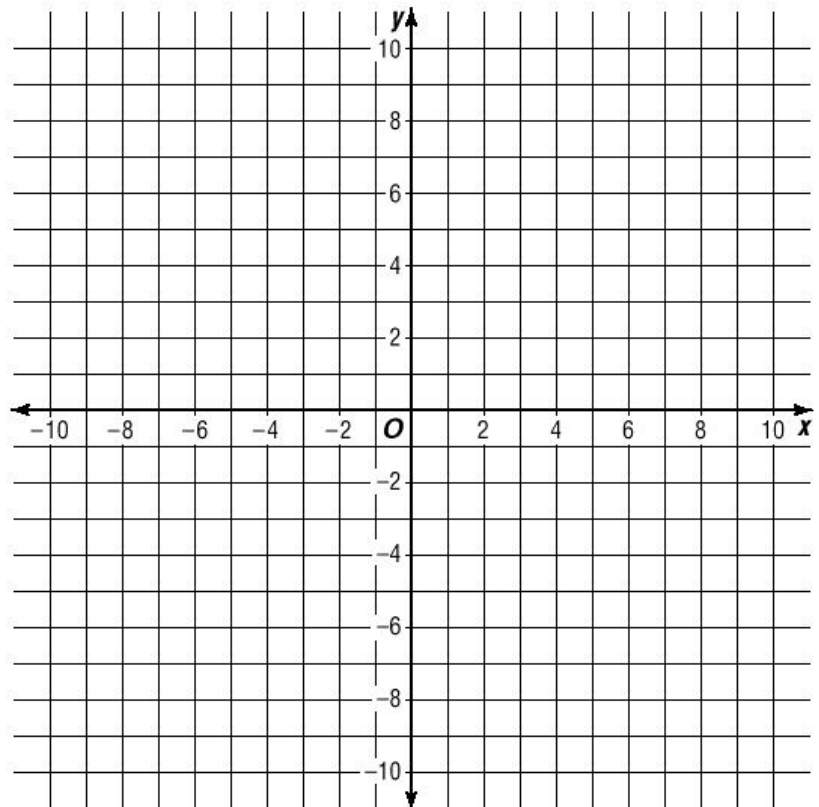


Practice: Graph each of the following using the intercepts:

1. $5x - 3y = 15$

2. $2x - y = 8$

3. $x - 3y = 9$



Standard Form and Intercepts

Math 3 6.0

Determine the x and y-intercepts for each equation below.
Convert to Standard Form where necessary.

1. $x - 3y = -9$

x-int.: _____

y-int. _____

2. $5x - 2y = 10$

x-int.: _____

y-int. _____

3. $x - 9y = 7$

x-int.: _____

y-int. _____

4. $2x - 7y = 3$

x-int.: _____

y-int. _____

5. $x + 9 = 3y$

x-int.: _____

y-int. _____

6. $3y = 2x - 5$

x-int.: _____

y-int. _____

7. $y = 2x - 3$

x-int.: _____

y-int. _____

8. $2x - 12 = 4y$

x-int.: _____

y-int. _____

9. $\frac{y - 2}{3} = x$

x-int.: _____

y-int. _____

10. $\frac{3}{4}y = x - 5$

x-int.: _____

y-int. _____

11. $y = \frac{x - 9}{5}$

x-int.: _____

y-int. _____

12. $\frac{1}{2}y = \frac{2}{9}x - \frac{1}{3}$

x-int.: _____

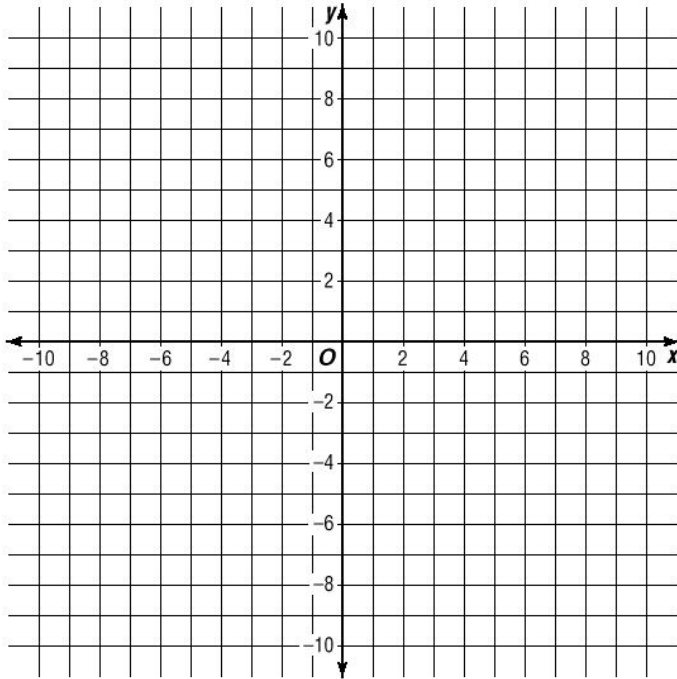
y-int. _____

Standard Form

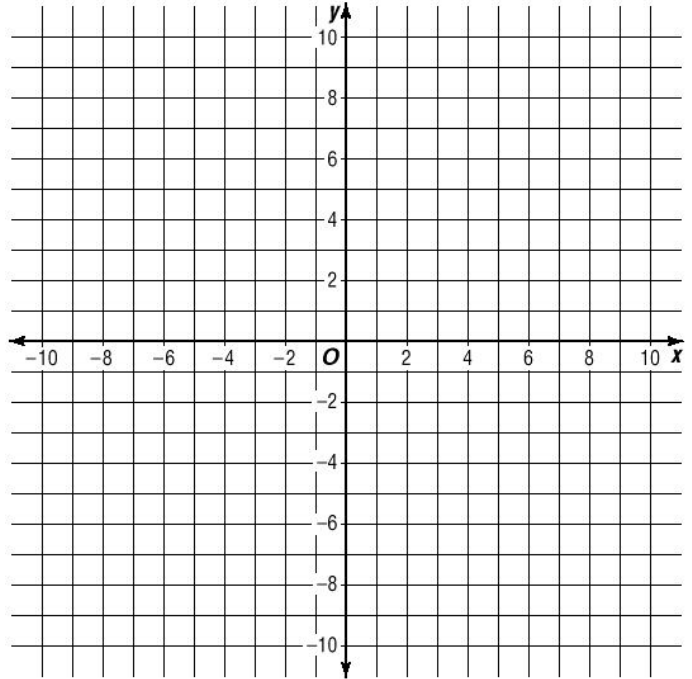
Math 3 6.0

Graph each equation below using the intercepts.
Connect the intercepts. Intercepts are all whole numbers.

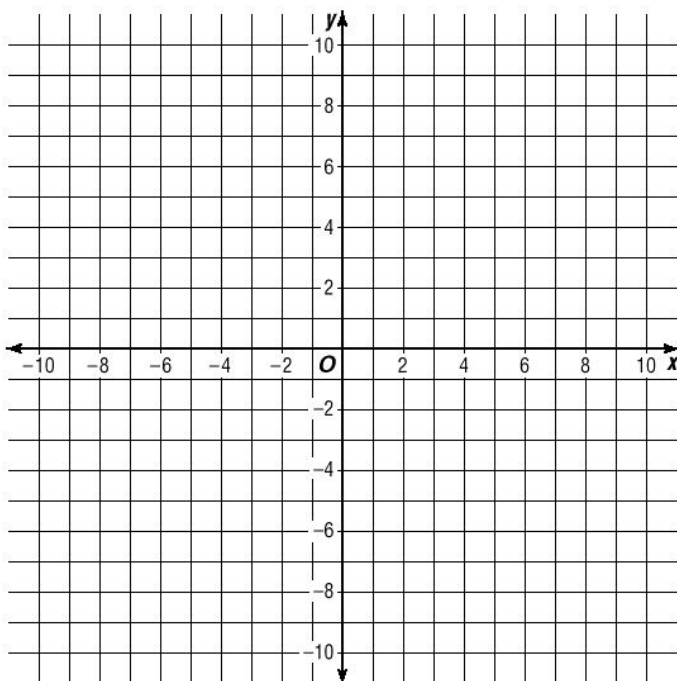
13. $x + 2y = 6$



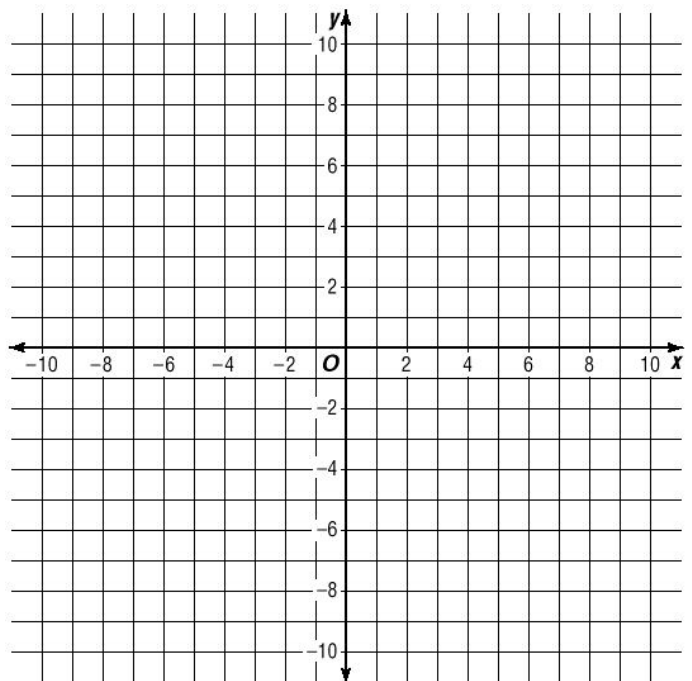
14. $6x - 3y = -12$



15. $3x - y = 6$



16. $x - 2y = -10$



Practice: Graphing Equations

Math 3

Graph each. Remember to extend your lines to the edge of the graphs.

Method 1: Find both intercepts with the cover-up method. Connect them and extend the lines.

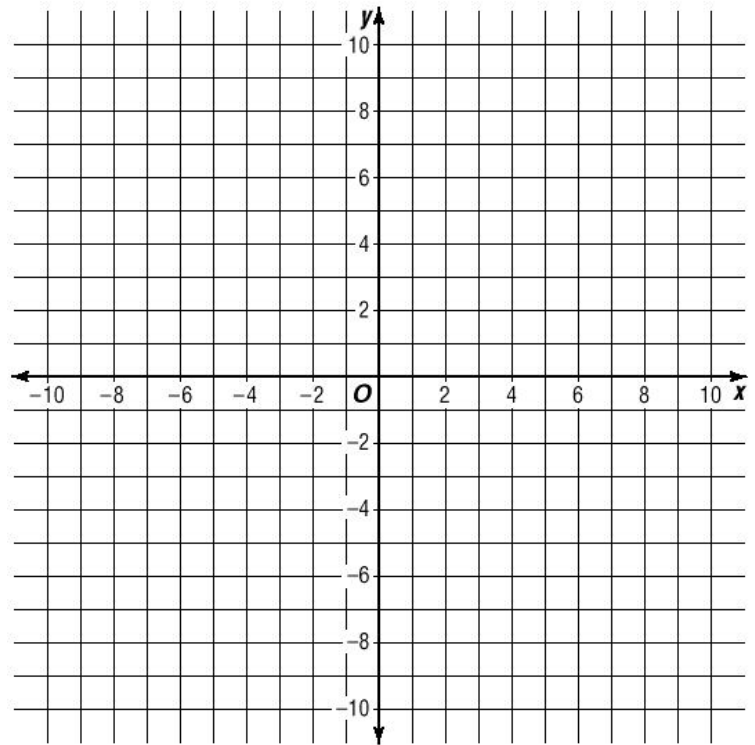
Method 2: Solve for y . Plug-in values for x to get at least three points plotted, then extend the line.

Clearly label each graph with a 1, 2, or 3.

1. $2x - 5y = 10$

2. $2x + y = 3$

3. $x - 6 = 2y$



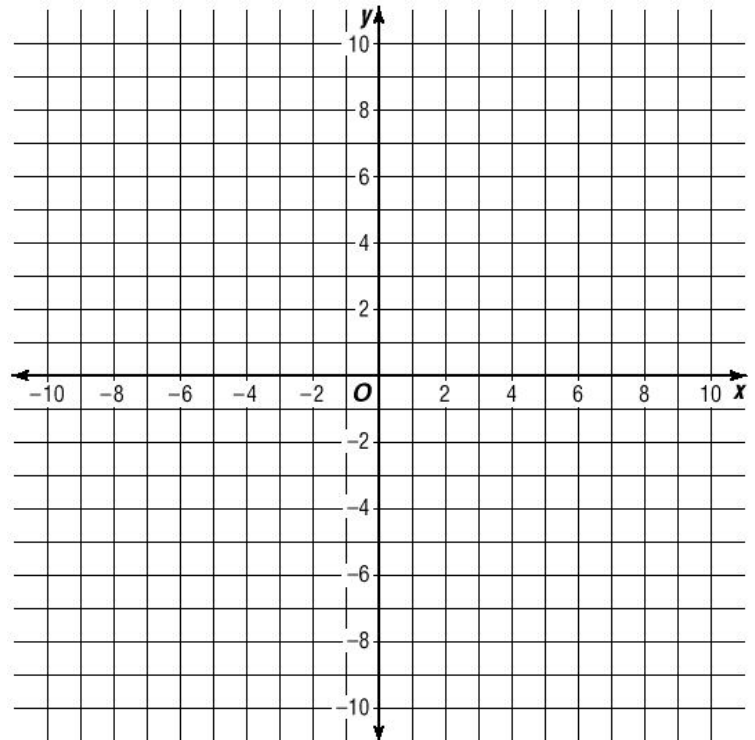
Graph each. Remember to extend your lines to the edge of the graphs.

Clearly label each graph with a 4, 5, or 6.

4. $y - 2x = -9$

5. $2x - 7y = 14$

6. $y = -\frac{2}{3}x + 5$



Practice: Graphing Equations

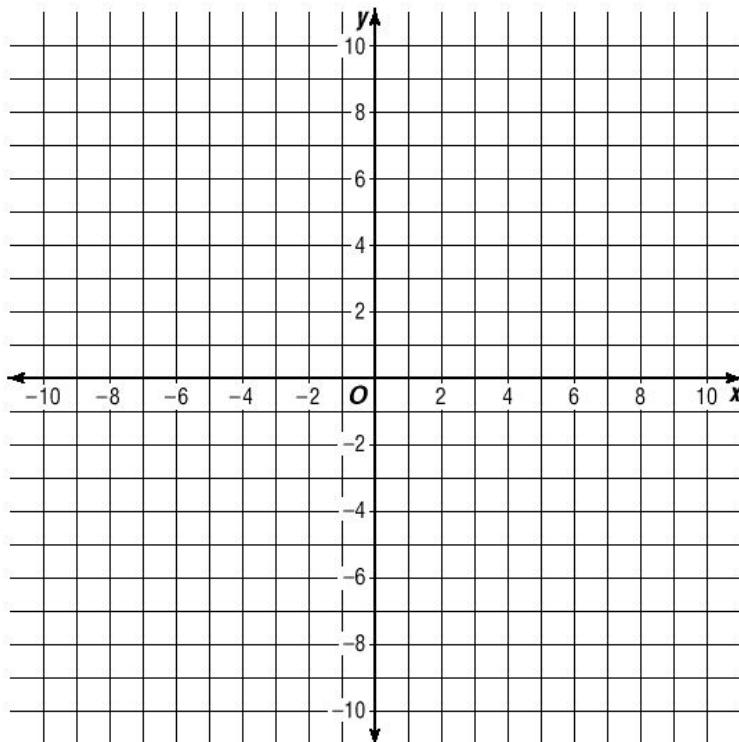
Math 3

Graph each. Remember to extend your lines to the edge of the graphs.
Clearly label each graph.

7. $x - 2y = 6$

8. $y = -4x + 7$

9. $\frac{1}{2}x + 2 = \frac{2}{3}y$

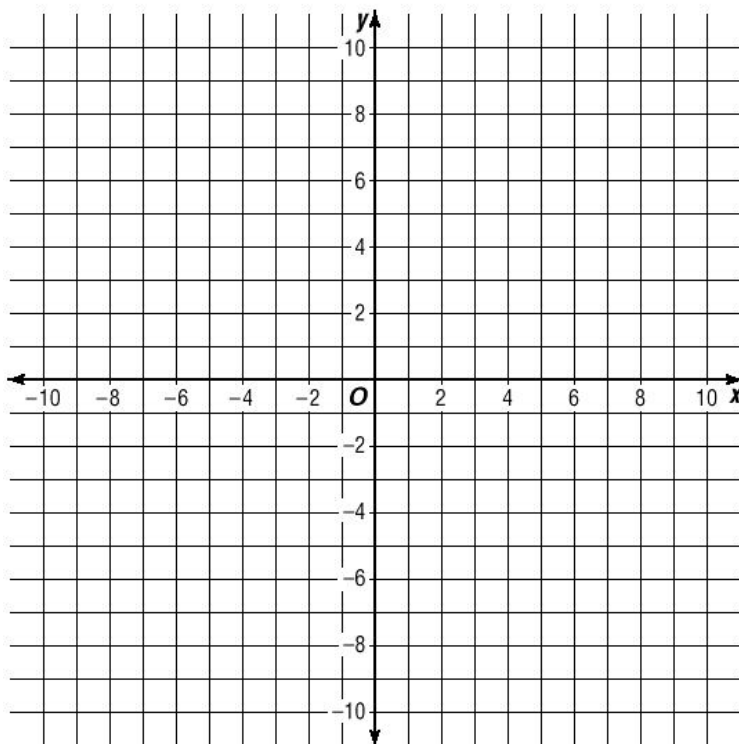


Graph each. Remember to extend your lines to the edge of the graphs.
Clearly label each graph.

10. $y = -x + 7$

11. $3x - 5y = 15$

12. $y = -\frac{1}{2}x - 8$



Self-Check: Linear Equations

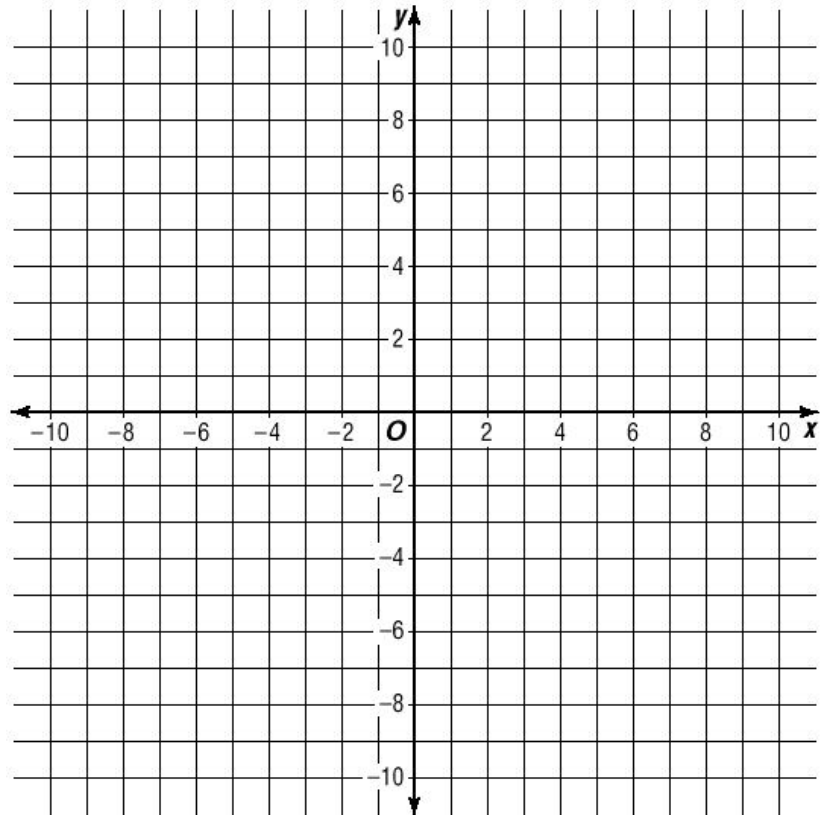
Math 3

Graph each. Remember to extend your lines to the edge of the graphs.
Label each graph with a 1, 2, or 3.

1. $y = 2x - 9$

2. $3x - y = 6$

3. $y = \frac{2}{3}x - 6$



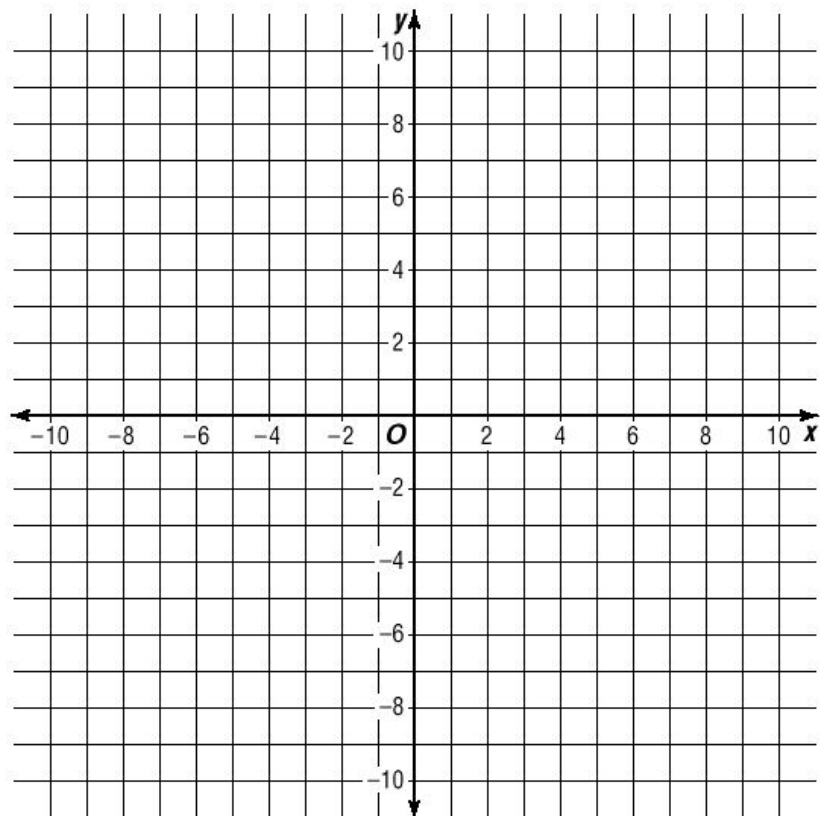
Self-Check: Linear Equations

Graph each. Remember to extend your lines to the edge of the graphs.
Label each graph with a 1, 2, or 3.

1. $y = 2x - 9$

2. $3x - y = 6$

3. $y = \frac{2}{3}x - 6$



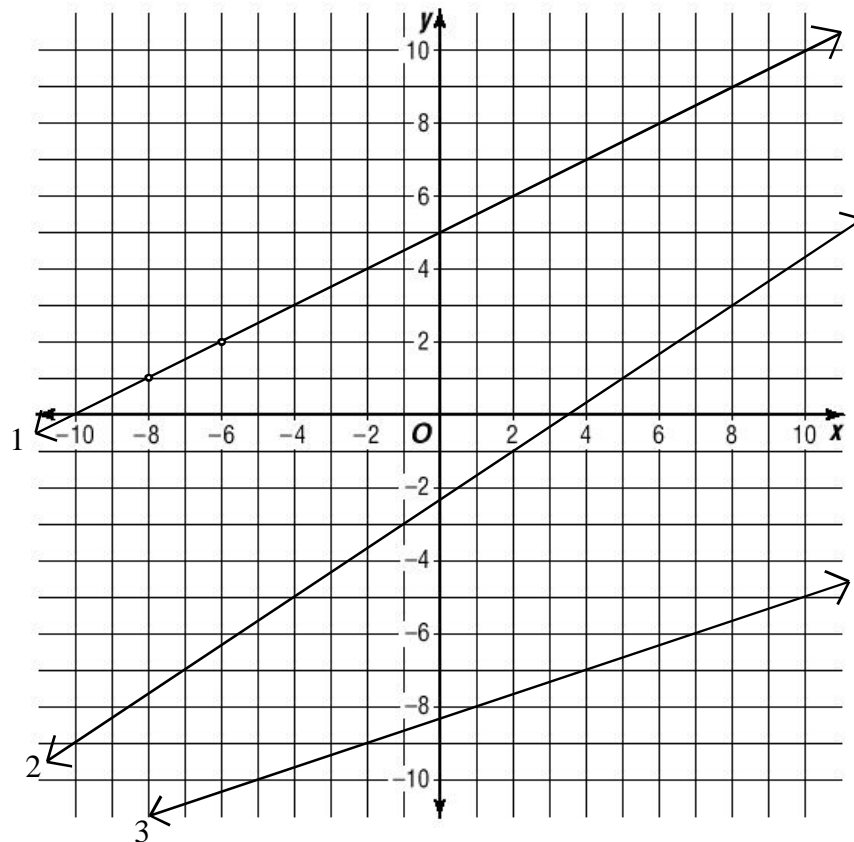
Slope

The **Slope** of a line is its **RISE over RUN**.

1. Read graphs **left to right**, just like sentences.
2. Find a point on the graph of a line.
3. Count how far you must go **UP AND OVER** to get to the next point.
4. Write this as a fraction: Ex.

$$\text{Slope} = \frac{\text{up } 2}{\text{over } 3} = \frac{2}{3}$$

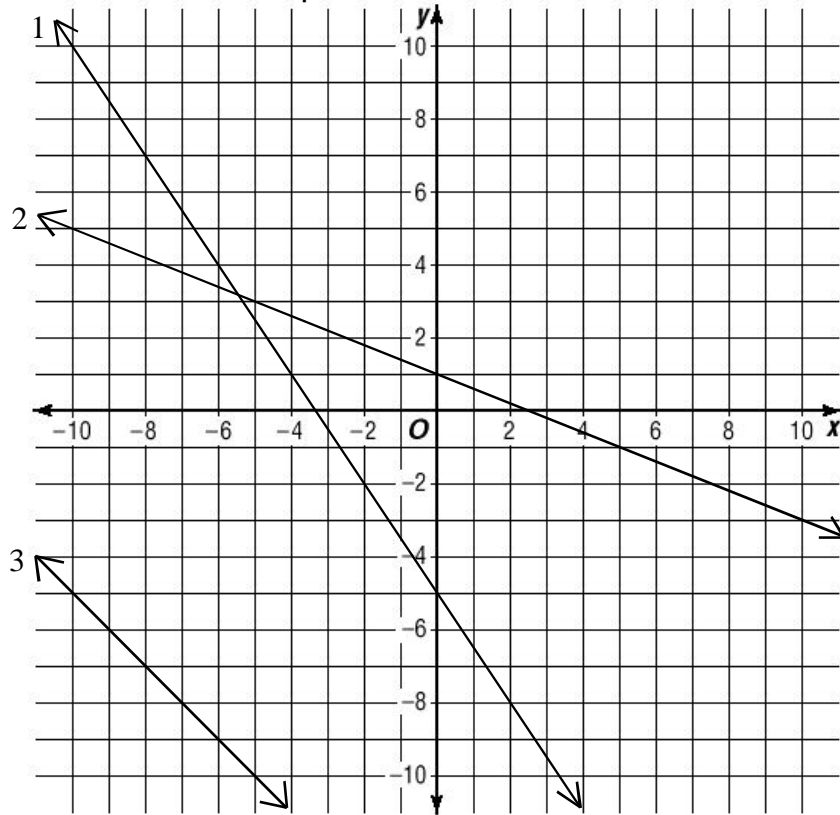
Examples: State the slope of each line:



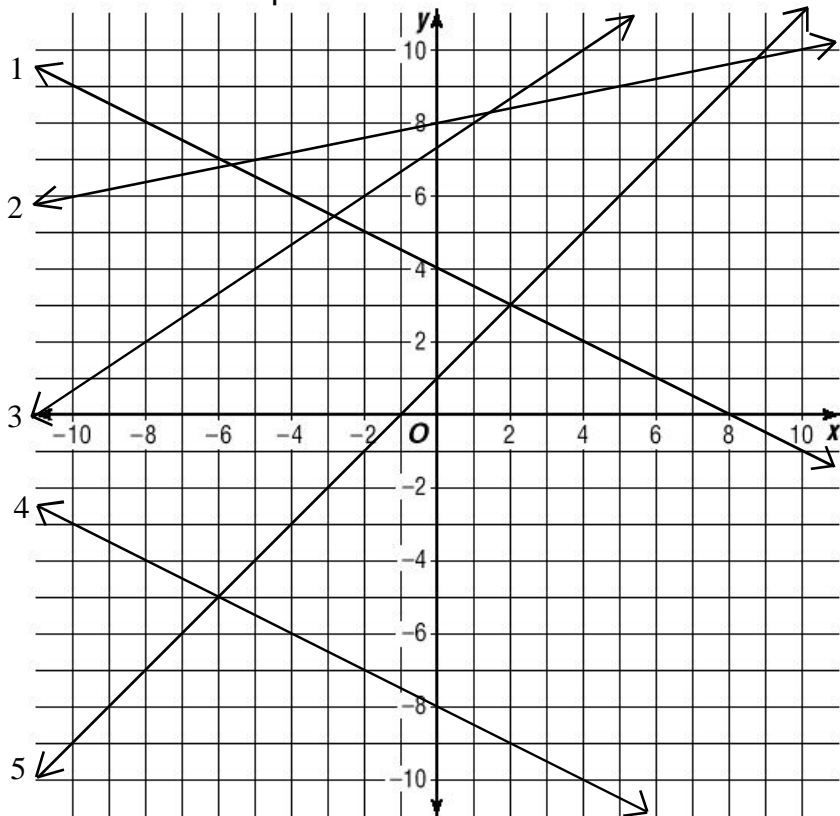
Slope

Slope is not always positive. Working from left to right, if you go **down and over**, this is negative slope.

Examples: State the slope of each line:



Practice: State the slope of each line:



Slope

You do not need a graph to find the slope of a line.

How could you find the RISE given two coordinates? **ex.** (4, 2) and (8, 10)

How could you find the RUN given two coordinates?

Example:

Find the slope of the line passing through (3, 5) and (7, 7).

How far UP?

How far OVER?

notes:

Given two coordinates: (x_1, y_1) and (x_2, y_2)

Slope Formula: $m = \frac{y_2 - y_1}{x_2 - x_1}$ **memorize this!**

To find the slope you must divide the y's and the x's.

y minus y over x minus x.

Rise over run.

That's how you find the slope.

Examples:

Find the slope of a line passing through each given pair of points:

1. (9, 4) (7, 10)

2. (-2, -5) (4, 1)

Practice:

Find the slope of a line passing through each given pair of points.

Simplify all slopes and LEAVE IMPROPER FRACTIONS:

1. (-3, 0) (1, 2)

2. (3, 4) (4, -1)

3. (6, -2) (7, -7)

4. (1, -5) (-9, 1)

5. (8, 4) (-5, 15)

6. (-1, -5) (4, -10)

Slope-Intercept Form

Graphing a Linear Equation:

Method 1: x/y Chart

Method 2: Intercepts (from Standard Form)

Use one of the methods above to graph each of the following equations. Then, list the slope and the y-intercept of each equation.

$$y = \frac{1}{2}x - 5$$

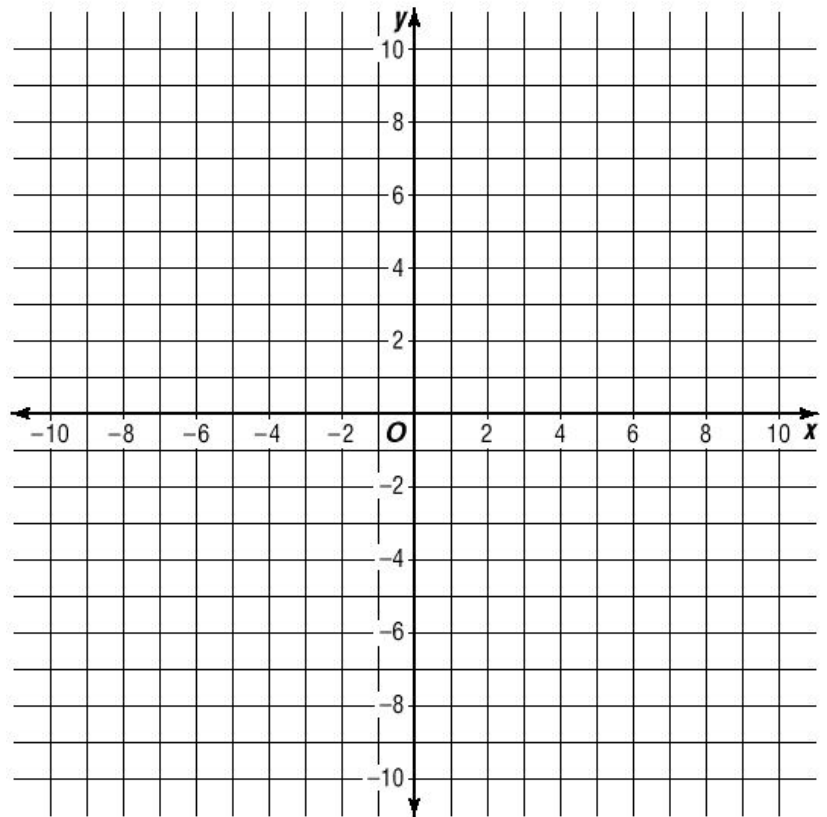
slope: _____

y-int: _____

$$y = -\frac{2}{3}x + 3$$

slope: _____

y-int: _____



Guess what form we are going to learn next....

Slope-Intercept Form

MEMORIZE THIS:

$$y = mx + b \quad \text{Where } m \text{ is the slope and } b \text{ is the y-intercept.}$$

This is the most useful form of a linear equation, especially for graphing.

Why Learn the Other Ways to graph? **Math 3**

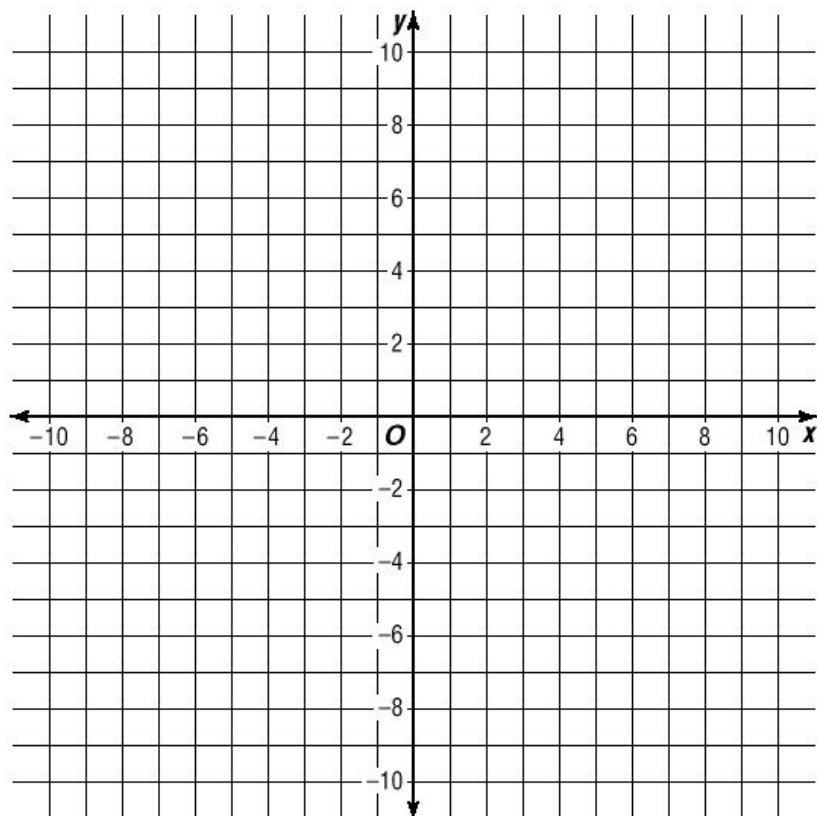
Glad You Asked...

Slope-intercept form is great for graphing linear equations. After students learn it they often ask “Why did you make us do it so many times the hard way?”

The “hard way” helps you understand equations as relationships between variables. All slope-intercept form gives us is a quick way to visualize a graph using two values (slope and intercept) associated with the equation.

Here are three graphing questions that you cannot answer just by learning slope-intercept form, but can be easily answered by someone who has a better understanding graphing equations the “hard” way:

1. What does the graph of the equation $y = |x - 5|$ look like?
2. Where does the graph of $3x - y = 120$ cross the x-axis?
3. What happens to the y value in the equation $y = 2x - 3$ when the x value is increased by 5?



Slope-Intercept Form

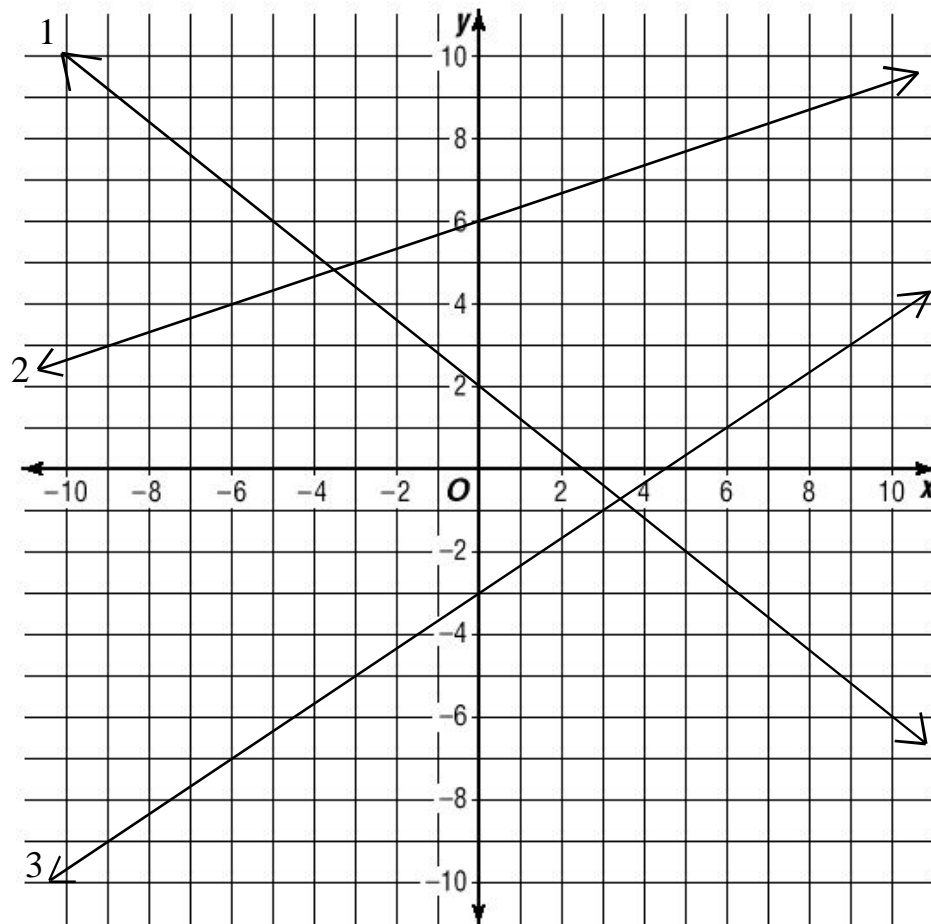
Practice: Graph each using Slope-Intercept Form.

1. $y = -\frac{2}{3}x + 5$ 2. $y = -2x - 5$ 3. $3y = 5x - 12$

Practice: Convert each into Slope-Intercept Form, then graph.

1. $x - 7y = -21$ 2. $x + 3y = 30$ 3. $x + 5y = -25$
(Why is Standard Form less useful for graphing these equations?)

Practice: Write an equation for each line graphed below in Slope-Intercept Form.



Practice: Convert these answers to Standard Form.

1. $y = -\frac{4}{5}x + 2$ 2. $y = \frac{1}{3}x + 6$ 3. $y = \frac{2}{3}x - 3$

Slope-Intercept Form

Convert Each into Slope-Intercept Form

1. $x - 3y = -9$

slope: _____

y-int. _____

2. $5x - 2y = 10$

slope: _____

y-int. _____

3. $x - 9y = 18$

slope: _____

y-int. _____

4. $2x - 7y = 21$

slope: _____

y-int. _____

5. $x + 9 = 3y$

slope: _____

y-int. _____

6. $3y = 2x - 15$

slope: _____

y-int. _____

7. $5y - 2x = -30$

slope: _____

y-int. _____

8. $2x - 12 = 4y$

slope: _____

y-int. _____

9. $\frac{y - 2}{3} = x$

slope: _____

y-int. _____

10. $\frac{3}{4}y = x - 6$

slope: _____

y-int. _____

11. $y = \frac{x - 9}{5}$

slope: _____

y-int. _____

12. $\frac{1}{2}y = \frac{2}{9}x - \frac{1}{3}$

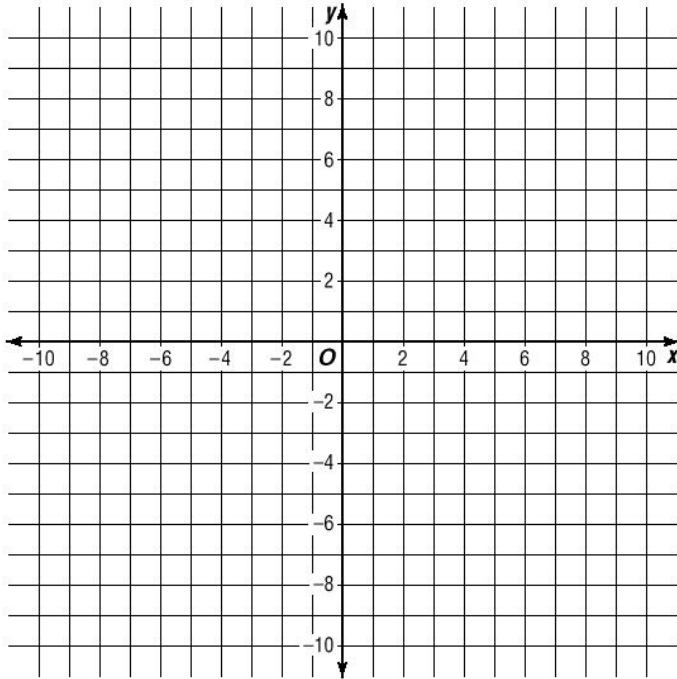
slope: _____

y-int. _____

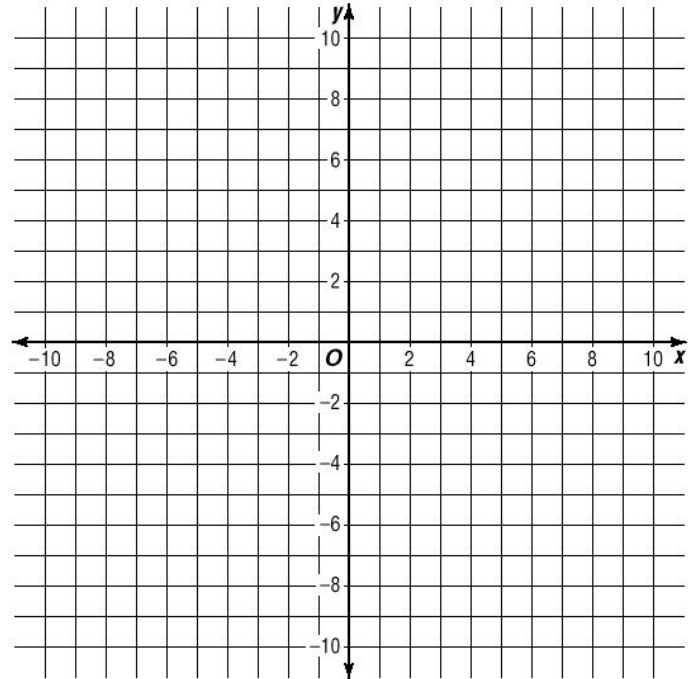
Slope-Intercept Form

Graph each equation below using slope-intercept form.

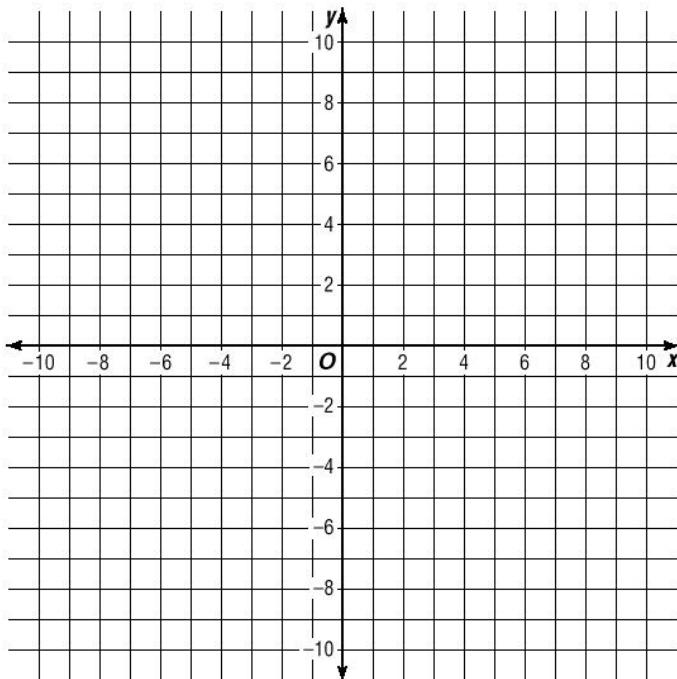
13. $y = -\frac{2}{3}x - 5$



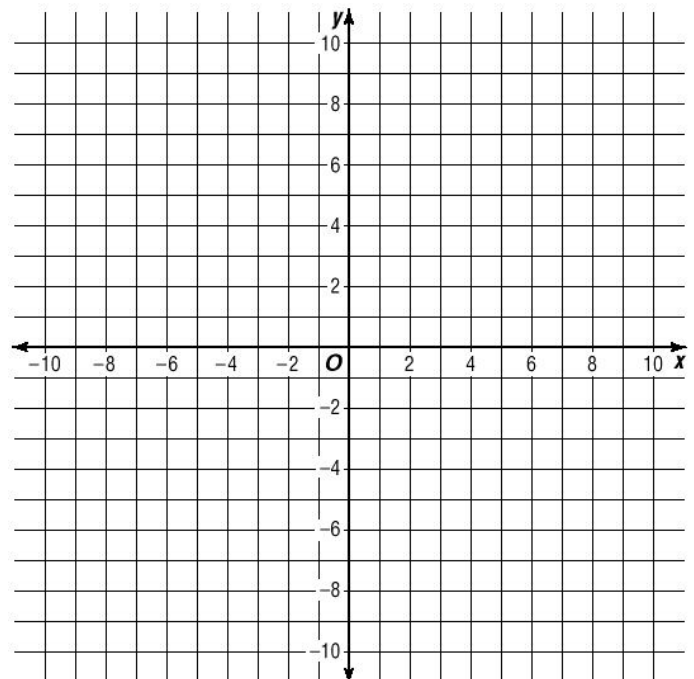
14. $5x - 3y = 18$



15. $2x - y = 6$



16. $\frac{1}{2}x - \frac{3}{4}y = 6$



Slope:

100. $y = -\frac{2}{3}x - 5$

200. $5x - 3y = 18$

300. $(1, 3)$ and $(5, 13)$

400. $(2, -5)$ and $(-3, 4)$

500. $\frac{5}{9}x - \frac{3}{4}y = 2$

600. $y = \frac{7(x - 3)}{3} + x$

Intercepts:

100. $2x - 3y = 6$

200. $5x - 4y = 15$

300. $3y = 8x - 7$

400. $\frac{1}{2}x = \frac{3}{4}y - 5$

500. $2(x - y) = y - 5x$

600. $\frac{1}{2}x - \frac{3}{11}y = \frac{2}{7}$

Quiz Review

Slope-Intercept Form:

100. $y - 3 = x$

200. $-\frac{3}{4}y = x + 1$

300. $\frac{1}{2}y - \frac{1}{3}x = 2$

400. $y - 3 = \frac{4}{5}(x - 5)$

500. $2x - \frac{1}{5}y = \frac{1}{3}$

600. $2 = \frac{x - 3}{y - 2}$

Standard Form:

100. $y = x - 5$

200. $\frac{1}{2}y - x = 5$

300. $y - 3 = \frac{2}{5}x$

400. $-2x = \frac{y - 5}{3}$

500. $\frac{x}{2} + \frac{y}{5} = \frac{3}{10}$

600. $\frac{1}{2}(x - y) = \frac{2}{7}(x + y)$

Practice Quiz: Linear Equations

Math 3 6.2

Convert Each to Standard Form and list values for A, B, and C.

1. $y - x = 6$

1. A=____B=____C=____

2. $y - 2 = 7x$

2. A=____B=____C=____

3. $-\frac{1}{2}x + \frac{2}{5} = y$

3. A=____B=____C=____

4. $2 = \frac{1}{4}y$

4. A=____B=____C=____

5. $\frac{x+3}{2} = y$

5. A=____B=____C=____

State the y-intercept of each equation below:

6. $x - y = 4$

6. y-int. _____

7. $y = \frac{1}{4}x + 3$

7. y-int. _____

8. $x - 3 = \frac{1}{2}y$

8. y-int. _____

9. $2x - 5y = 3$

9. y-int. _____

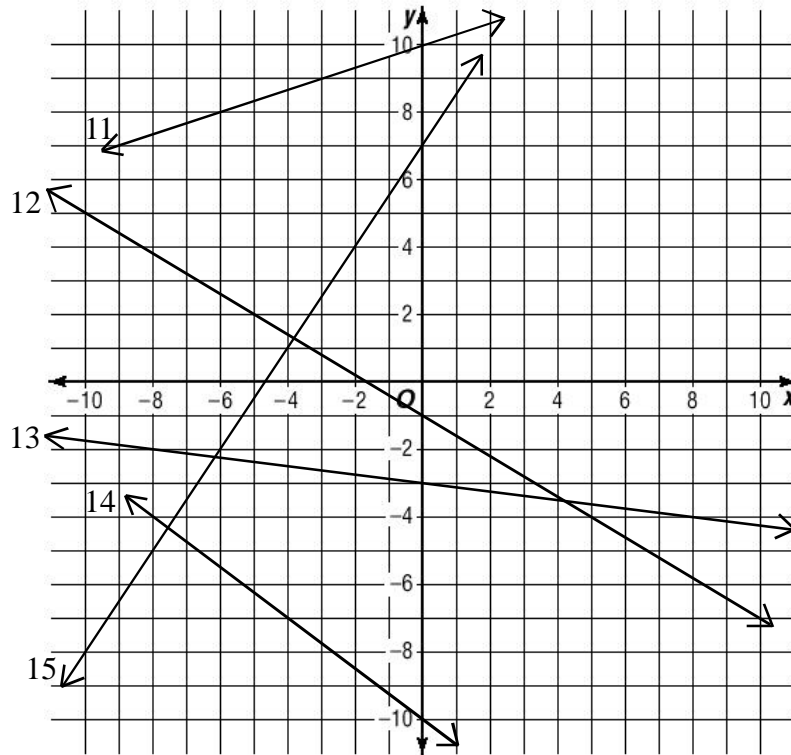
10. $5 - x = y$

10. y-int. _____

Practice Quiz: Linear Equations

Math 3 6.2

Write an equation in slope-intercept form for each:



11. $y =$ _____

12. $y =$ _____

13. $y =$ _____

14. $y =$ _____

15. $y =$ _____

State the slope for each equation or pair of points:

16. $2x - 5y = 10$

16. $m =$ _____

17. $\frac{2}{3}y = x$

17. $m =$ _____

18. $(9, 10)$ and $(-1, -5)$

18. $m =$ _____

19. $(-3, -1)$ and $(4, 5)$

19. $m =$ _____

20. $(4, -12)$ and $(-4, 12)$

20. $m =$ _____

Self-Check: Linear Equations

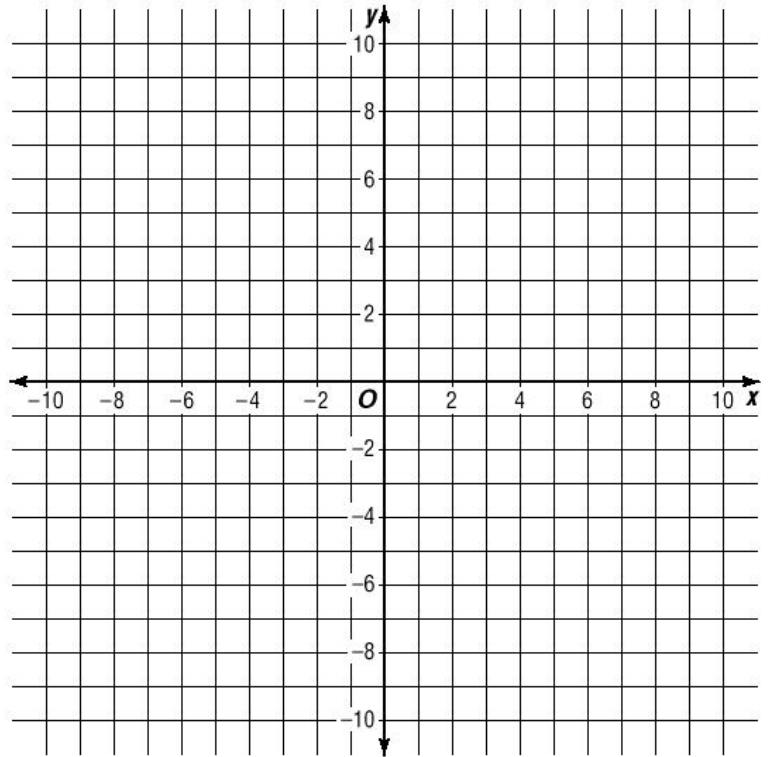
Math 3

Graph each. Remember to extend your lines to the edge of the graphs.
Label each graph with a 1, 2, or 3.

1. $y = 2x - 9$

2. $3x - y = 6$

3. $2x - 3y = 18$



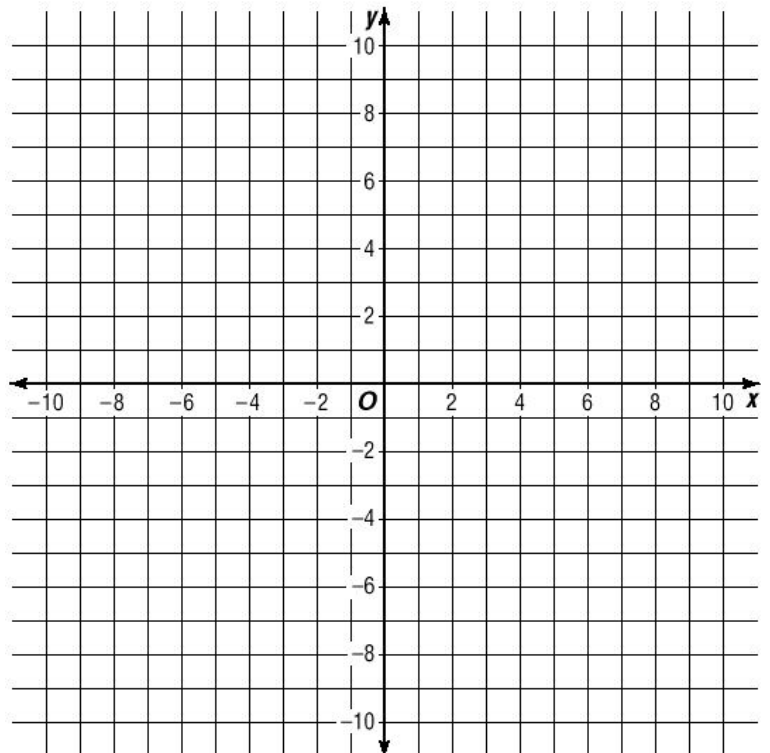
Self-Check: Linear Equations

Graph each. Remember to extend your lines to the edge of the graphs.
Label each graph with a 1, 2, or 3.

4. $x = 4y - 8$ (careful!)

5. $2x - 7y = 6$ (think!)

6. $x - 4y = 3$ (think!)



Slope and Standard Form

Math 3

Practice: Convert each of the following Standard-Form equations into Slope-Intercept Form. State the slope of each.

1. $2x + y = -2$ 2. $4x + 3y = 12$ 3. $2x + 5y = -8$

There is a simple formula that can be used to find the slope of any Standard Form equation. Try to find it by solving Standard Form for Slope-Intercept Form:

$$Ax + By = C \text{ becomes } y = -\frac{A}{B}x + \frac{C}{B}$$

Examples: State the slope of each equation:

1. $2x - 3y = 4$ 2. $x - y = 5$ 3. $7x - y = 3$

Practice: State the slope of each equation:

1. $3x - 5y = 9$ 2. $3x - y = 1$ 3. $2x - 5y = 3$
4. $8x - 13y = 41$ 5. $9x - 9y = 7$ 6. $x - 4y = 35$

Practice: For each of the following, find the slope and one intercept without converting. Graph each:

1. $2x - 5y = 8$ 2. $x - 3y = 6$ 3. $2x - 7y = -2$

Slope and Standard Form

Math 3

Graph each. Remember to extend your lines to the edge of the graphs.
Clearly label each graph with a 1, 2, 3, or 4.

1. $2x - 3y = 10$

m=

2. $3x + 2y = 10$

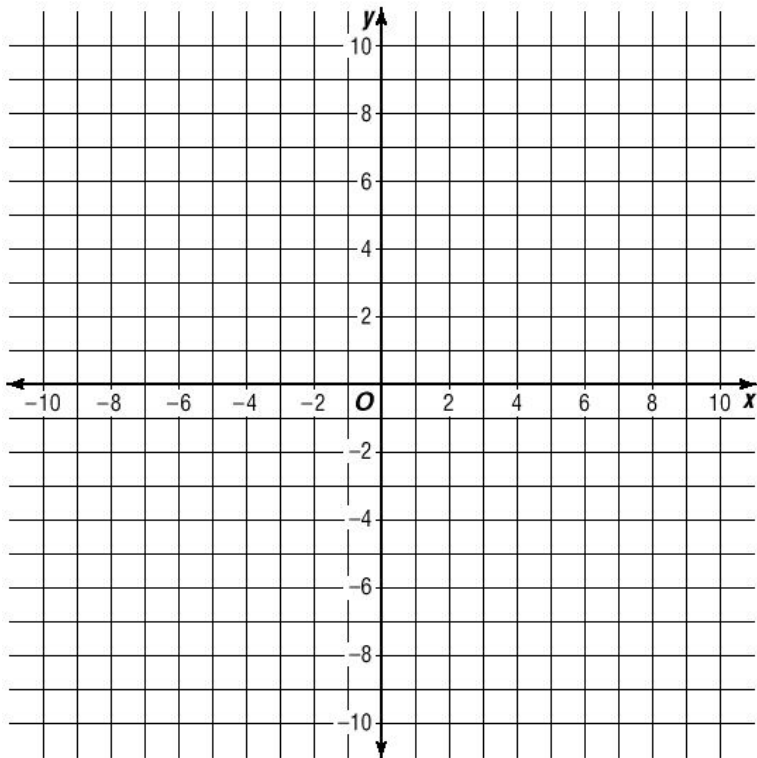
m=

3. $x - 4y = 3$

m=

4. $2x - 7y = 2$

m=



Graph each. Remember to extend your lines to the edge of the graphs.
Clearly label each graph with a 5, 6, 7, or 8.

5. $x - 2y = 7$

m=

6. $4x + 3y = 8$

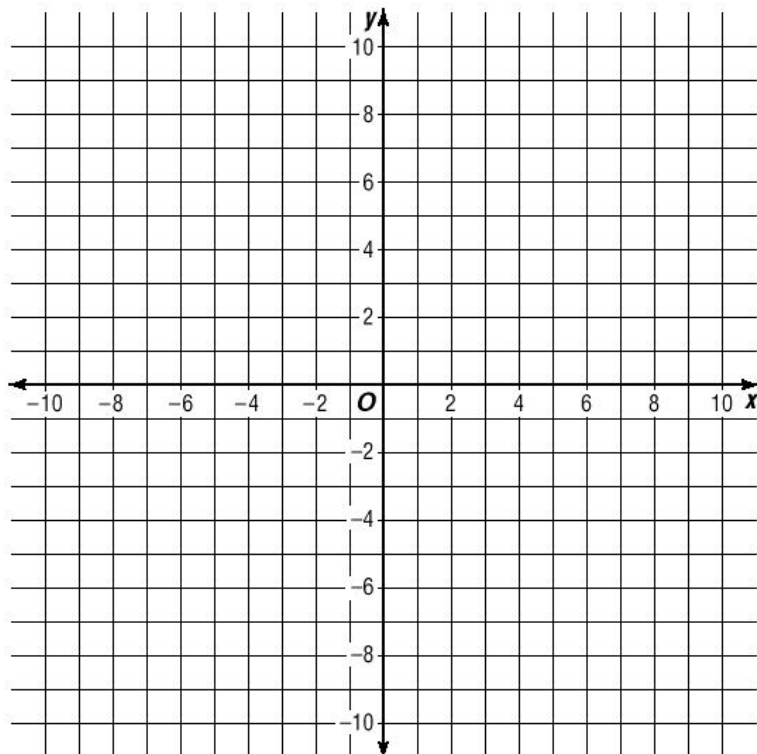
m=

7. $9x - 2y = 27$

m=

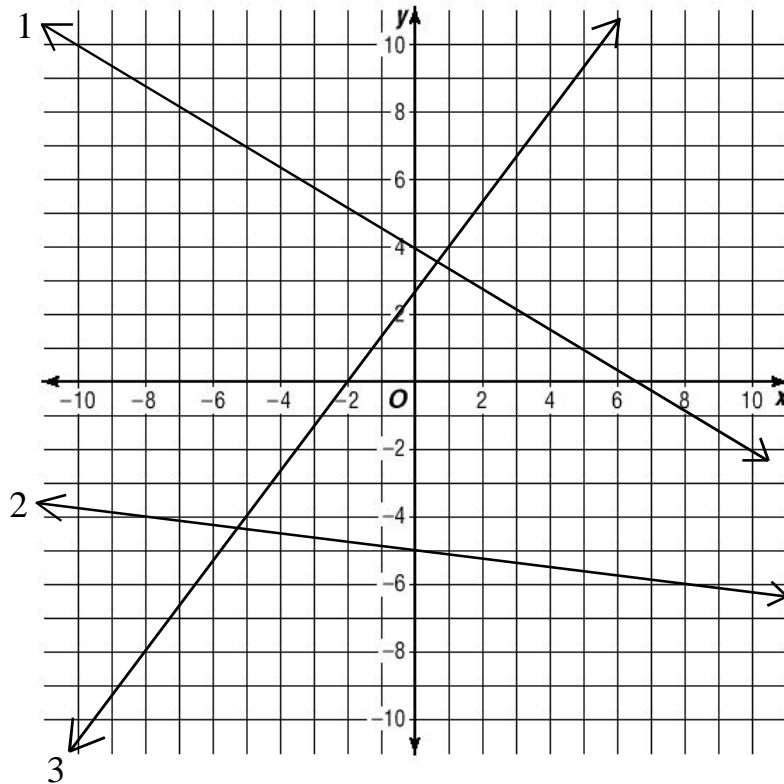
8. $8x - 9y = -24$

m=



Point-Slope Form

Practice: Write an equation for each in Slope-Intercept Form:



We need a new form!

POINT-SLOPE FORM

Given any point on the line (x_1, y_1)

and the slope of the line m

$$y - y_1 = m(x - x_1) \quad \text{MEMORIZE THIS!}$$

Examples:

Write an equation in Point-Slope Form using the information given.

1. $(-5, 3) \quad m = \frac{1}{2}$

2. $(5, -9) \quad m = -\frac{2}{5}$

Practice:

Write an equation in Point-Slope Form using the information given.

1. $(4, -1) \quad m = -\frac{1}{8}$

2. $(-6, -3) \quad m = -2$

Point-Slope Form

You can write a Point-Slope equation given any two points.

Try it on your own: Write a Point-Slope equation for the line that passes through $(-1,7)$ and $(2,-5)$.

Practice:

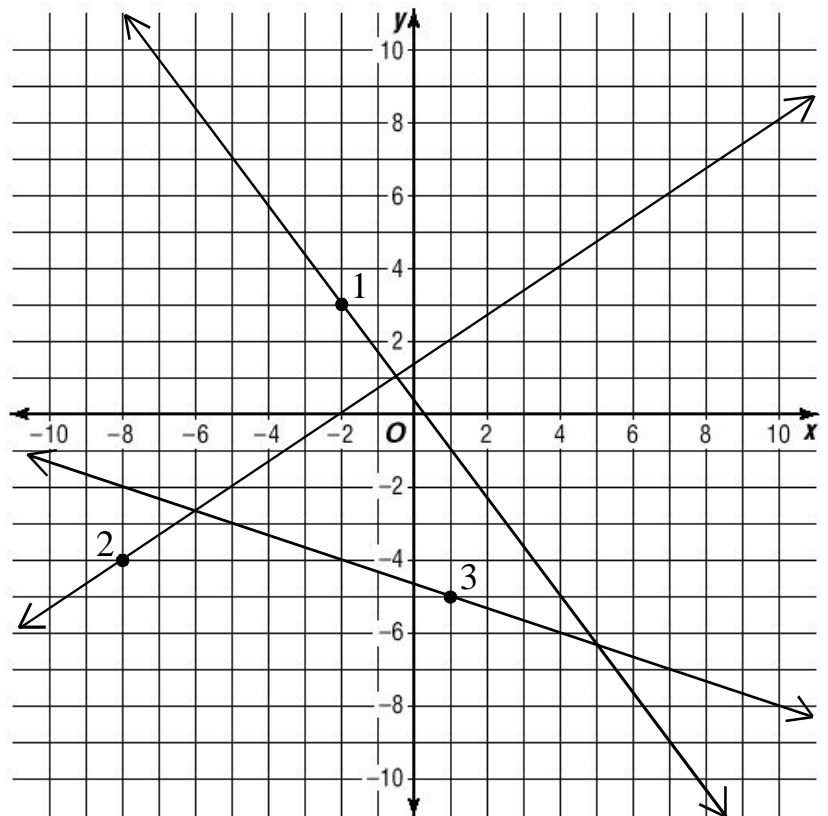
Write an equation in Point-Slope Form using the information given.

1. $(6,2)$ $(-1,-3)$

2. $(14,-11)$ $(-6,5)$

Practice:

Write an equation in Point-Slope Form for each graph. Use the darkened point.



Practice:

Convert each equation you got for the lines above into Standard Form:

1. $y - 3 = -\frac{4}{3}(x + 2)$

2. $y + 5 = -\frac{1}{3}(x - 1)$

3. $y - 2 = \frac{2}{3}(x + 7)$

Self Check: Four Formulas

Math 3 6.4

Review:

Write each of the four formulas listed below in the blank provided:

Slope: _____

Slope-Intercept Form: _____

Standard Form: _____

Point-Slope Form: _____

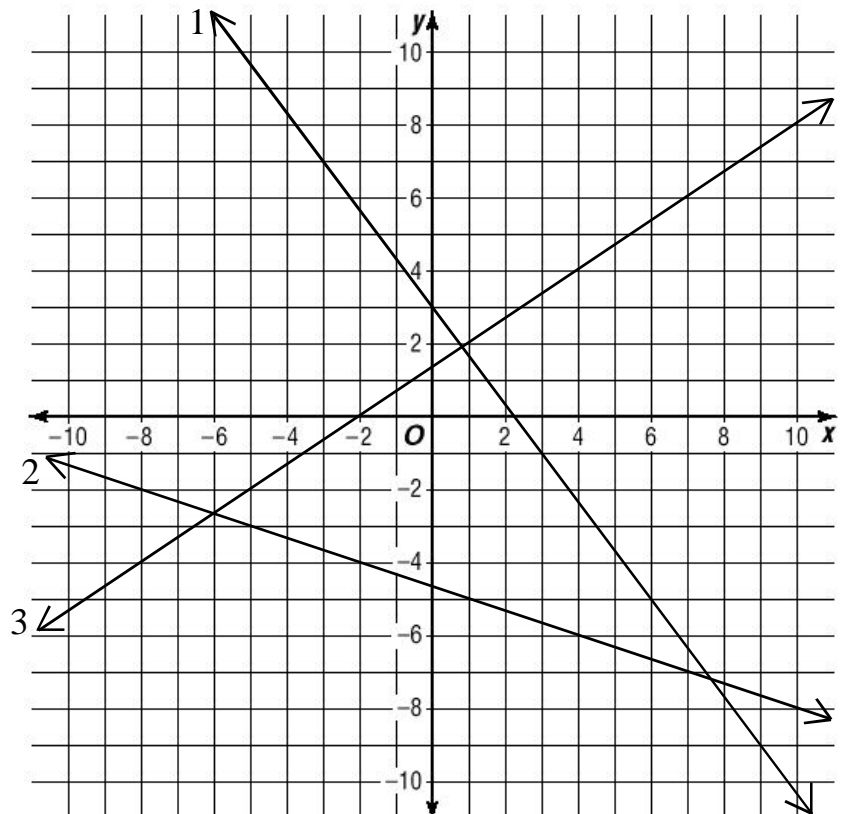
Self Check: Four Formulas

Write an equation for each in Standard Form:

1. _____

2. _____

3. _____



Review

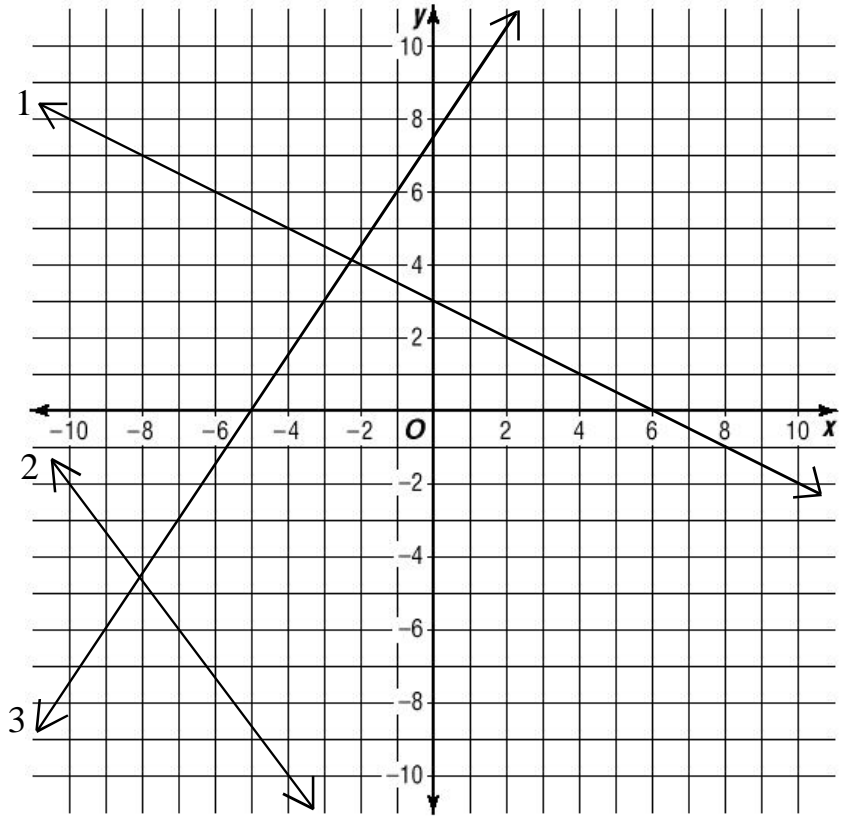
Practice:

Write an equation for each line graphed below in the form listed.

1. Slope-Intercept:

2. Point-Slope Form:

3. Standard Form:

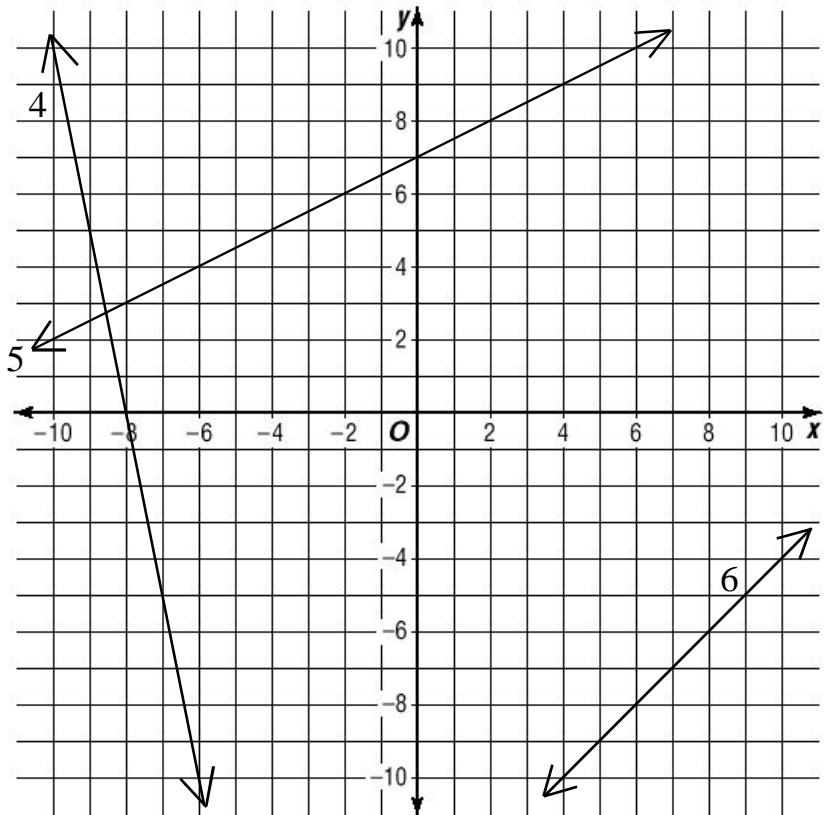


Practice: Write an equation for each line graphed below in all three forms:

4. _____

5. _____

6. _____



Review: Four Formulas

Find the slope between each pair of points:

1. $(-4, -3)$ $(5, -7)$

2. $(9, -1)$ $(-2, 0)$

3. $(6, -7)$ $(-3, -7)$

4. $(-8, 4)$ $(-8, -10)$

5. $(7, -1)$ $(-11, 2)$

6. $(2, -3)$ $(-2, 3)$

Write an equation for each pair of points below in Point-Slope Form, then convert it into both Standard and Slope-Intercept Forms:

7. $(1, -1)$ $(6, -11)$

8. $(5, -3)$ $(-2, 4)$

Point-Slope: _____

Point-Slope: _____

Standard: _____

Standard: _____

Slope-Intercept: _____

Slope-Intercept: _____

9. $(7, -2)$ $(-3, -7)$

10. $(-2, 5)$ $(-9, 15)$

Point-Slope: _____

Point-Slope: _____

Standard: _____

Standard: _____

Slope-Intercept: _____

Slope-Intercept: _____

Review: Four Formulas

Math 3 6.4

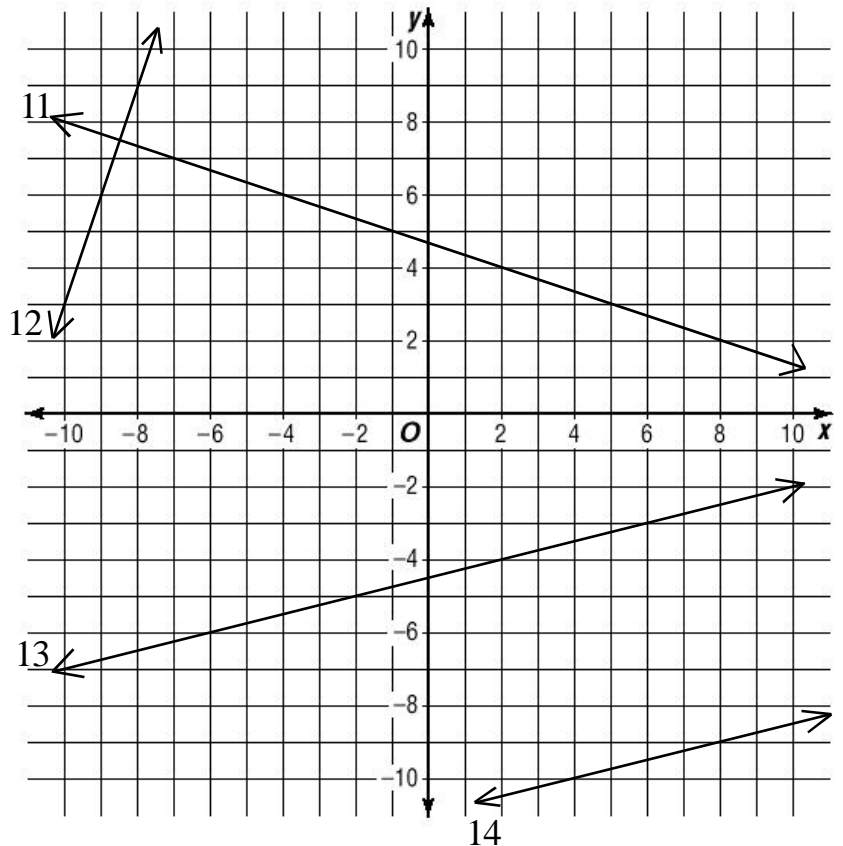
Write an equation for each in the form listed:

11. Standard

12. Slope-Intercept

13. Standard

14. Point-Slope



Name both Intercepts for each equation:

15. $2x - 5y = 40$

x-int.: _____

y-int. _____

16. $7x - 3y = 10$

x-int.: _____

y-int. _____

17. $x - 7y = 11$

x-int.: _____

y-int. _____

18. $20x - 17y = 34$

x-int.: _____

y-int. _____

19. $x + 15 = 5y$

x-int.: _____

y-int. _____

20. $y = 2x - 5$

x-int.: _____

y-int. _____

Practice Quiz: Linear Equations 3

Math 3

State the y-intercept of each equation below:

1. $y = 3x - 5$

1. y-int. _____

2. $4y = \frac{1}{2}x - 8$

2. y-int. _____

3. $x = \frac{1}{3}y - 2$

3. y-int. _____

4. $2x - 3y = 6$

4. y-int. _____

5. $3x - 2 = 5y$

5. y-int. _____

State the slope for each equation or pair of points:

6. $3x - 5y = 2$

6. m=_____

7. $\frac{2}{3}x = \frac{1}{2}y + 7$

7. m=_____

8. $(6, -1)$ and $(4, -3)$

8. m=_____

9. $(-2, 1)$ and $(5, -4)$

9. m=_____

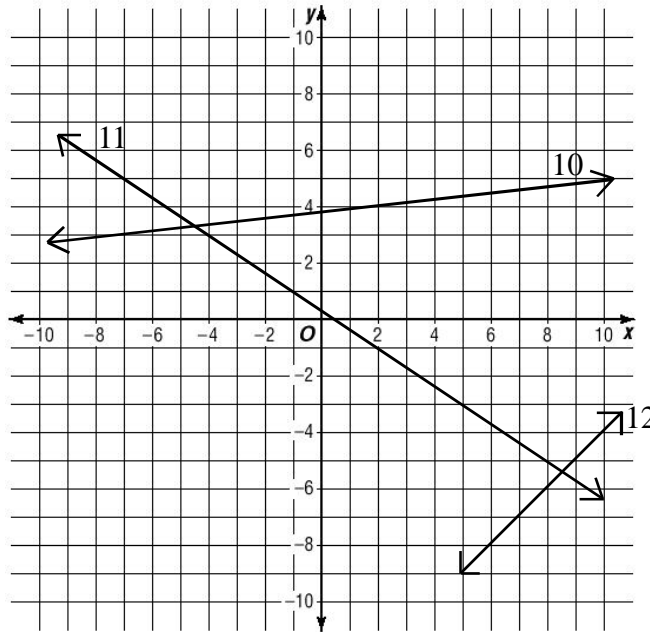
10. $(5, -2)$ and $(7, -3)$

10. m=_____

Practice Quiz: Linear Equations 3

Math 3

Find the slope of each line:

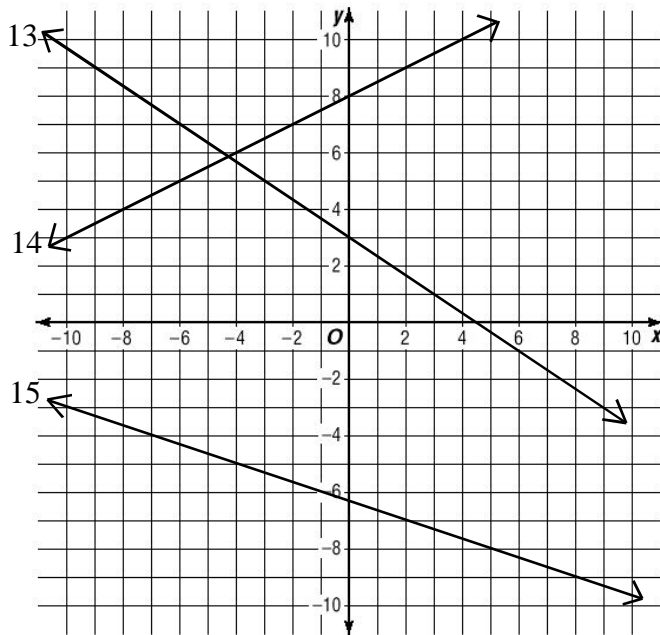


10. slope: _____

11. slope: _____

12. slope: _____

Write an equation for each line in the form listed:



13. Slope-Intercept: _____

14. Standard: _____

15. Standard: _____
(hint: start with point-slope)

Write a Point-Slope equation for each, then convert to the form listed:

16-17. $(-3, 5)$ $(4, -2)$

16. Point-Slope Form: _____

17. Standard Form: _____

Parallel/Perpendicular Lines

Math 3 6.5

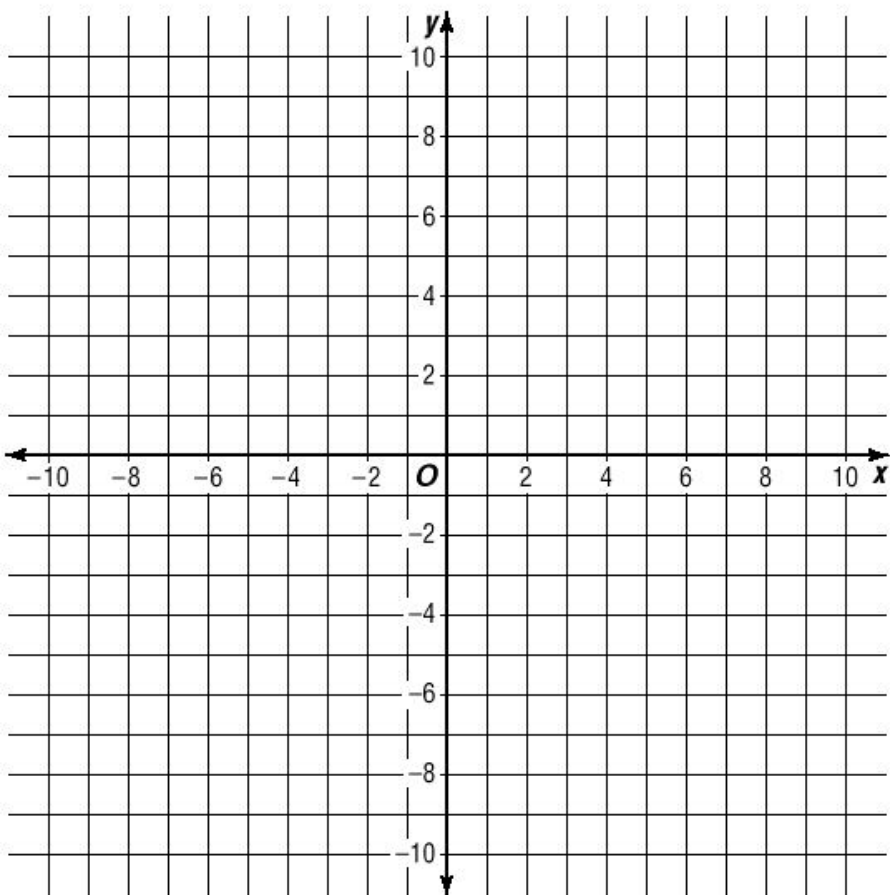
Graph the following linear equations on the **SAME GRAPH**:

A. $y = \frac{3}{4}x + 5$

B. $3x - 4y = 16$

C. $y = -\frac{4}{3}x + 1$

D. $y + 6 = \frac{4}{3}(x + 9)$



The slopes of lines that are parallel are _____.

The slopes of lines that are perpendicular are _____.

Examples:

Find the parallel AND perpendicular slopes for each:

1. $m = \frac{1}{2}$

2. $(5, -9)$ $(-4, 6)$

3. $3x - y = 5$

Practice:

Find the parallel AND perpendicular slope for each:

1. $m = -3$

2. $(-2, 7)$ $(8, 2)$

3. $2x - 7y = 14$

Parallel/Perpendicular Lines

Math 3 6.5

Examples:

Write the equation for each of the following:

1. Parallel to $y = \frac{1}{2}x - 3$ through $(-5, 2)$ in Point-Slope Form:
2. Perpendicular to $x - 2y = 3$ through $(-3, -7)$ in Standard Form:

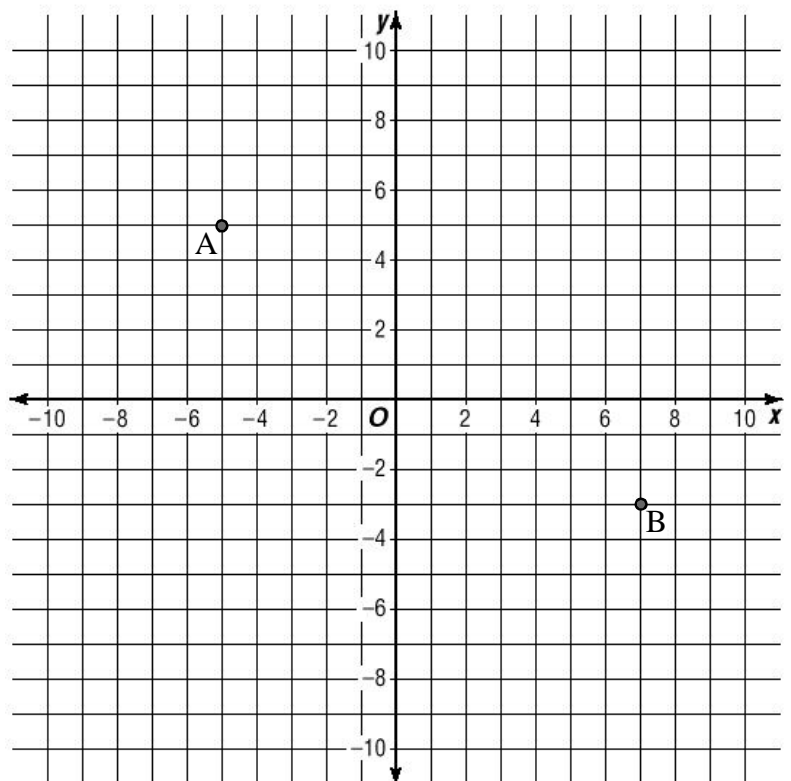
Practice:

Write the equation for each of the following:

1. Parallel to $y - 2 = \frac{2}{5}(x - 3)$ through $(-3, -5)$ in Point-Slope Form:
2. Perpendicular to $3x - y = 5$ through $(-2, 4)$ in Standard Form:
3. Perpendicular to $y - 3 = 5(x + 1)$ through $(1, 8)$ in Slope-Intercept Form:

Practice:

1. Write the Point-Slope equation for the line passing through both points to the right.
2. Write the equation for a perpendicular line passing through point A in Point-Slope Form.
3. Write the equation for a perpendicular line passing through point B in Standard Form.



Linear Modeling (Word Problems)

Math 3

Writing Linear Equations in Slope-Intercept Form

It is important to remember: y is the dependent variable, x is the independent variable, y always depends on x .

Slope is the rate of change and the y -intercept is the original amount.

Examples: Label your variables, then write an equation for each:

1. A bear cub weighs 8kg at birth and gains $\frac{3}{4}$ kilogram per week.
2. It costs \$75 to rent the space and \$15 per guest.
3. It costs \$5 to go to the fair and each ride costs \$1.

Practice: Write a linear equation for each:

1. Mailing a medium-sized package costs \$5 plus \$1.50 a pound.
Use c for cost and p for pounds.
2. A baby weighs 7 pounds at birth and gains a pound a month.
Use w for weight and m for months.

More Practice: Write an equation for each:

1. A restaurant delivers pizzas for \$8.95 each plus a \$4 delivery charge.
2. A cell-phone plan charges a \$0.50 connection fee and then \$.05 a minute for each call.
3. A taxi ride costs \$4.50 plus \$7.25 per mile.
4. A test has 18 questions. Students get 100 points and the teacher takes off 4 points for every incorrect or blank answer.

Linear Modeling (Word Problems)

Math 3 6.6

Point-Slope Form is more difficult:

Remember: y is the dependent variable, x is the independent variable, y always depends on x .

Begin with two points, then write a point-slope equation.

Examples: Label your variables, then write an equation for each:

1. A chef can make 9 batches of cookies in 4 hours, and 15 batches in 6 hours. Points should be in the form (h, b) . The number of b atches depends on the number of h ours.
2. In the same taxi, you went 5 miles for \$13, while a 13-mile trip cost \$29. Points should be in the form (m, c) . The c ost depends on the number of m iles.

Practice: Label your variables, then write an equation for each:

1. A baby weighs 14 pounds at 5 months and 21 pounds at 10 months. Points should be in the form (m, w) . The w eight depends on the age in m onths.
2. At Guiseppe's Pizza, to have four pizzas delivered costs \$28, while nine pizzas costs \$53. Points should be in the form $(\underline{\quad}, \underline{\quad})$. The $\underline{\quad}$ depends on the $\underline{\quad}$.

Practice: Write a point-slope equation, then convert it to slope-intercept form to answer the question that follows:

1. At Guiseppe's Pizza, to have four pizzas delivered costs \$28, while to have nine pizzas delivered costs \$53. There is a charge for delivery and a price per pizza. What is the delivery charge?
2. With an AT&T cell-phone plan, you pay \$0.74 for a 7-minute call, and \$3.05 for 40 minutes. What is the connection fee for AT&T?

Word Problems

Math 3 6.6

Write an equation to represent each situation given below in the form listed.
Convert each to the form listed.

1. Mario's Pizza charges \$7 for a medium pizza plus \$0.75 per additional topping.

Slope-Intercept Form: (use c for charge and t for toppings)

Standard Form:

2. A taxi ride in Boston costs \$11 for 2 miles, and \$18 for 4 miles.

Point-Slope Form: (use c for cost and m for miles)

Slope-Intercept Form:

3. A long distance company charges a \$1 connection fee, plus \$0.10 a minute.

Slope-Intercept Form: (use m for minutes and c for charge)

Standard Form:

4. It costs 85 cents for a 12-ounce beverage, and \$1.25 for a 20-ounce beverage:

Point-Slope Form: (Use n for ounces and c for cost)

Slope-Intercept Form:

Word Problems

Math 3 6.6

Write an equation to represent each situation given below in the form listed.
Convert each to the form listed.

5. A calf weighs 18 lbs when it is 2 months old, and after 8 months weighs 36 lbs.

Point-Slope Form: (use w for weight and m for months)

Slope-Intercept Form:

6. Shipping an internet purchase costs \$3 plus \$0.50 a pound.

Slope-Intercept Form: (use p for pounds and c for charge)

Standard Form:

7. An automotive factory makes 17 cars in 5 hours and in 8 hours can make 29 cars.

Point-Slope Form: (use h for hours and c for cars produced)

Slope-Intercept Form:

8. A rental car charges \$29 to rent the car plus \$45 a day:

Slope Intercept Form: (Use d for days and r for the rental fee)

Standard Form:

Graphing Inequalities

Math 3

Graphing Inequalities in Slope-Intercept Form

Works the same as graphing equations except:

Dash the line for $<$ or $>$

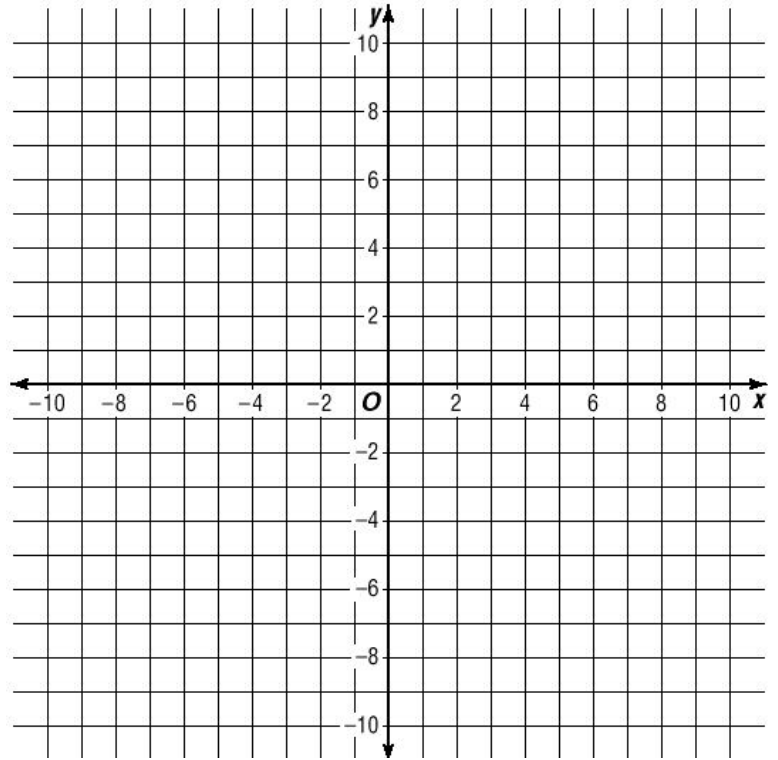
Shade above if $y >$

Shade below if $y <$

Examples:

$$1. y \leq 2x - 5$$

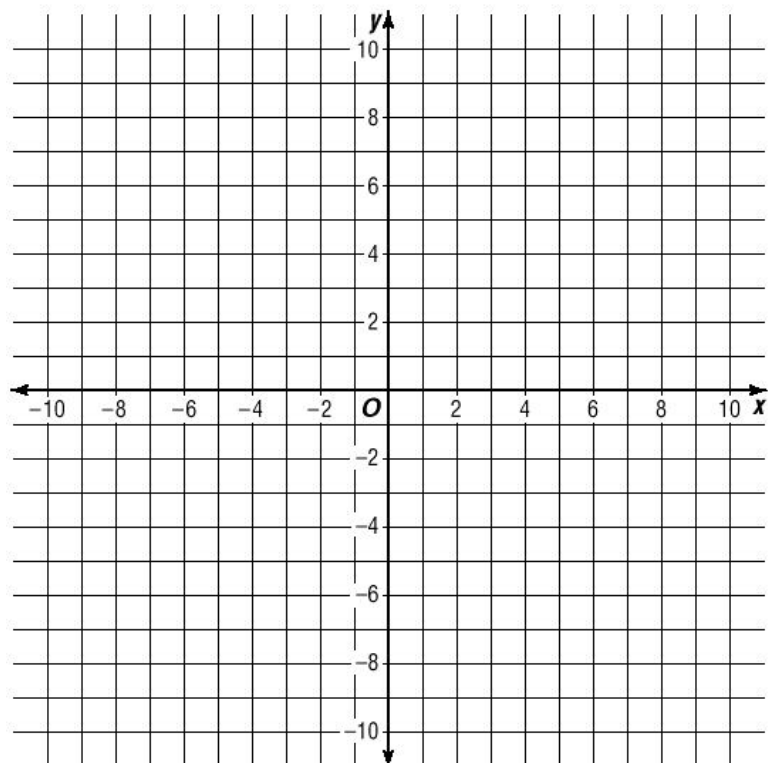
$$2. y > -\frac{1}{3}x - 6$$



Practice:

$$1. y < \frac{1}{2}x + 4$$

$$2. y \geq 5x + 1$$



Graphing Inequalities

Math 3

Other Forms: Convert to slope-intercept, then graph.

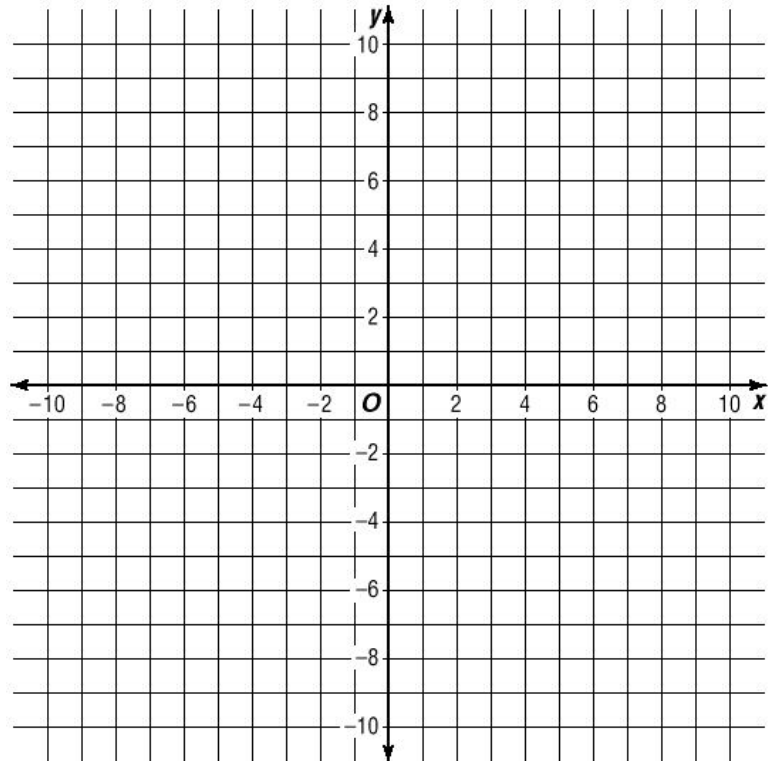
Don't forget:

While solving, if you multiply or divide both sides by a negative, reverse the direction of the $>$ symbol.

Examples:

1. $3x - y \leq 6$

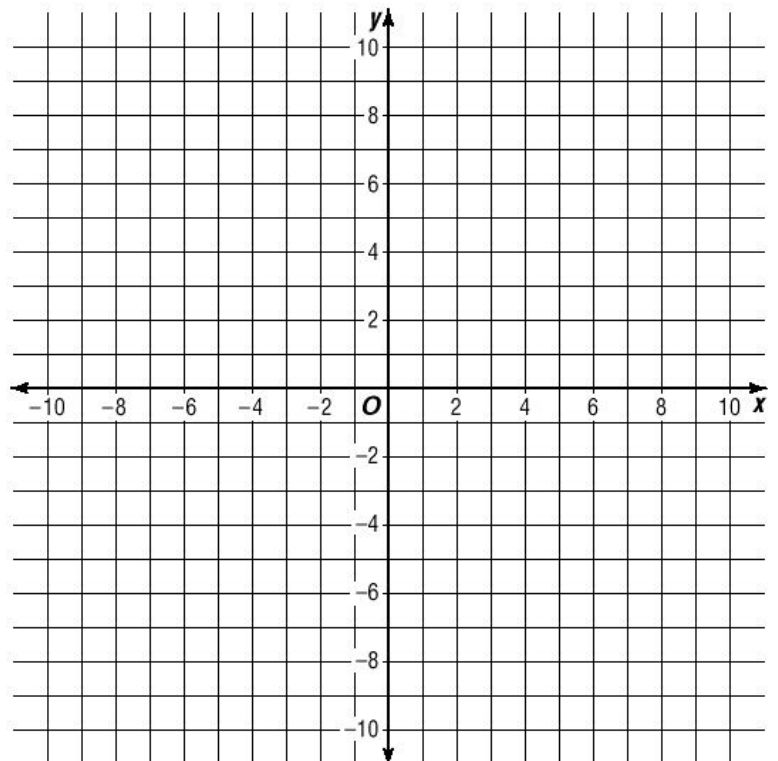
2. $y - 2 > 2(x - 6)$



Practice:

1. $3x - 2y < 6$

2. $\frac{x - y}{2} \geq 4$



Test Review

Slope-Intercept Form:

100. Convert $y - 2 = -\frac{3}{4}(x + 8)$ to Slope-Intercept Form.

200. Through $(-4, 2)$ and $(-3, 4)$ in Slope-Intercept Form.

300. Perpendicular to $15x - 4y = 59$ through $(-2, 11)$ in Slope-Intercept Form.

Slope:

100. Find the slope between $(-4, 2)$ and $(-3, 4)$.

200. Find the perpendicular slope to the graph of: $y = 5$

300. Find the slope of a line parallel to: $\frac{2}{3}y = \frac{4}{5}x - 5$

Word Problems:

100. A tow truck charges \$25 to pick you up plus \$3 a mile for the tow.
(c=charge, m=miles)

200. Michael made 5 pancakes in 30 minutes, and 10 pancakes in 40 minutes.
(p=pancakes, m=minutes)

300. A phone company charges \$0.50 the first minute and \$0.15 for every minute after that. (c=charge, m=minutes)

Test Review

Point-Slope Form:

100. Through $(-1,5)$ and $(-3,4)$ in Point-Slope Form.

200. Parallel to $x-3y=4$ through $(2,-8)$ in Point-Slope Form.

300. Perpendicular to $\frac{2}{3}x - \frac{1}{2}y = 5$ through $(-2,7)$ in Point-Slope Form.

Standard Form:

100. Convert $y-3 = \frac{1}{2}(x+4)$ to Standard Form.

200. Parallel to $2x-y=4$ through $(1,-1)$ in Standard Form.

300. Write an equation in Standard Form for the line whose x-intercept is -2 and whose y-intercept is 13.

Practice Test: Linear Equations

Math 3 6.6

State the x and y-intercepts of each:

1. $y = 4x - 1$

1. x-int. _____ y-int. _____

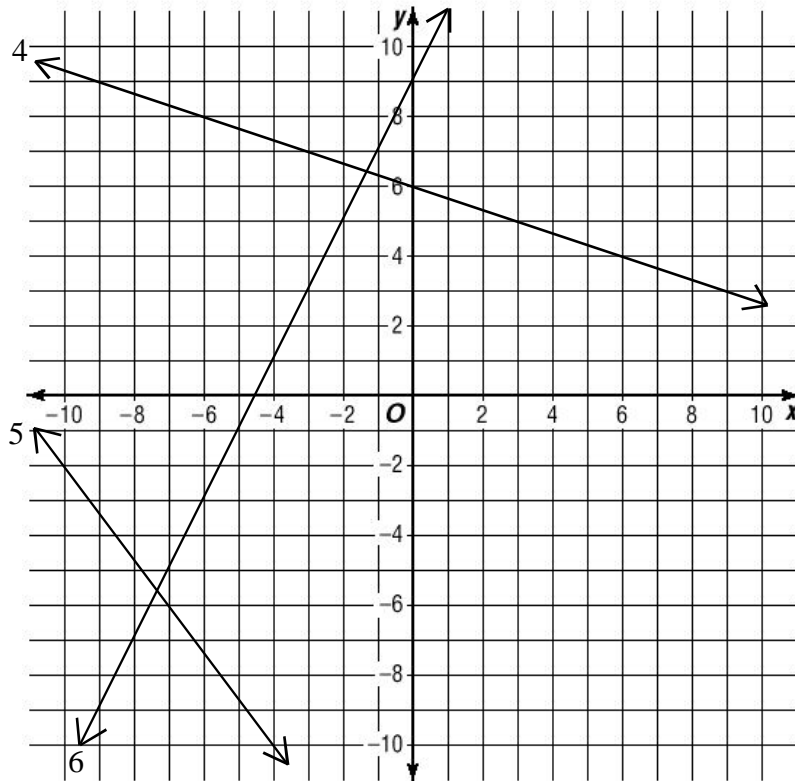
2. $2x - y = 8$

2. x-int. _____ y-int. _____

3. $x = \frac{1}{2}y - 5$

3. x-int. _____ y-int. _____

Write an equation for each line graphed below in the form listed:



4. Standard Form:

5. Point-Slope Form:

6. Slope-Intercept Form:

Find the slope for each equation or pair of points:

7. $3y = 4x$

7. slope: _____

8. $(2, -1)$ $(5, -3)$

8. slope: _____

9. $y = 7$

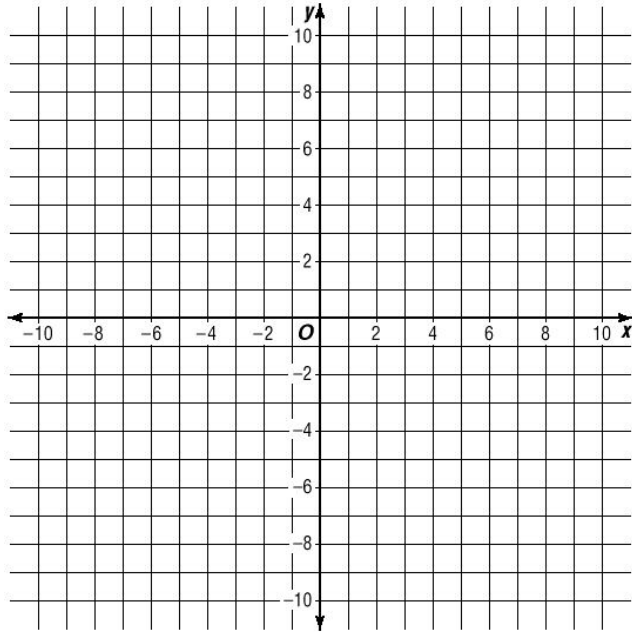
9. slope: _____

Practice Test: Linear Equations

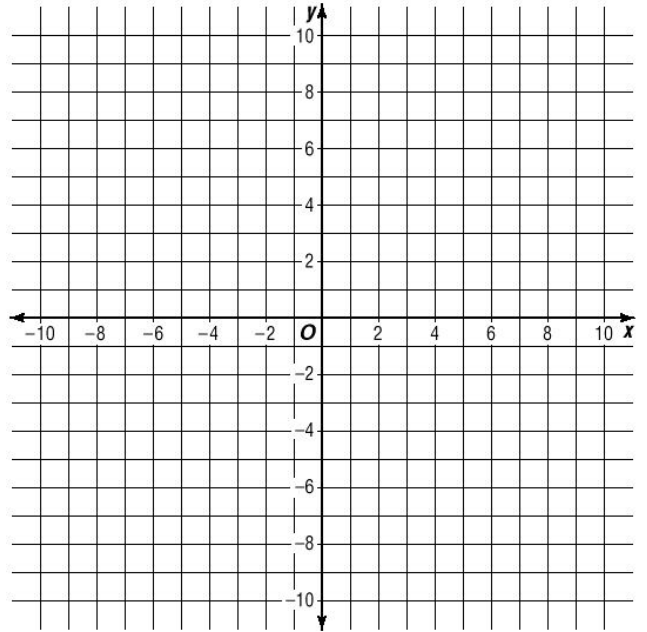
Math 3 6.6

Graph each inequality below:

10. $y > -2x + 5$



11. $2x - 3y \leq 9$



Write an equation for each using the variables given.

12. Lisa can currently run a quarter-mile in 85 seconds. If she practices for the next ten weeks, she can improve (decrease) her time by 2 seconds every week. Write an equation that could be used to find Lisa's mile time (t) in seconds based on the number of weeks (w) she has spent training.

12. Slope-Intercept Equation: _____

13. A baby tiger weighs 45 pounds at 5 months and 77 pounds at 9 months. If the growth of the baby tiger can be modeled by a linear equation, what is the weight of a baby tiger at birth?

13. Point-Slope Form Equation: _____

Write an equation in Slope-Intercept Form of a line *perpendicular* to the equation below which passes through the point given.

14. $x + 5y = 15$ $(-3, 2)$

14. Slope-Intercept Form: _____